

Administrativa



- **Assignment 1 due thursday 9/23/2004 BEFORE midnight**
- **Midterm exam 10/07/2003 in class**

Last time: search strategies



Uninformed: Use only information available in the problem formulation

- Breadth-first
- Uniform-cost
- Depth-first
- Depth-limited
- Iterative deepening

Informed: Use heuristics to guide the search

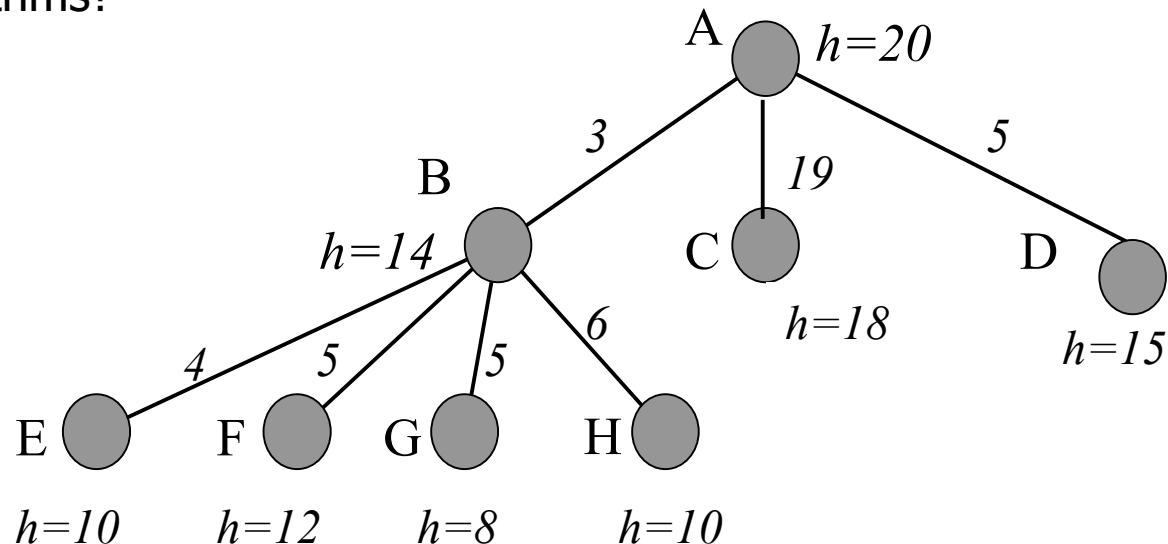
- Best first:
- Greedy search – queue first nodes that maximize heuristic “desirability” based on estimated path cost from current node to goal;
- A* search – queue first nodes that maximize sum of path cost so far and estimated path cost to goal.
- Iterative improvement – keep no memory of path; work on a single current state and iteratively improve its “value.”
- Hill climbing – select as new current state the successor state which maximizes value.
- Simulated annealing – refinement on hill climbing by which “bad moves” are permitted, but with decreasing size and frequency. Will find global extremum.

Exercise: Search Algorithms

The following figure shows a portion of a partially expanded search tree. Each arc between nodes is labeled with the cost of the corresponding operator, and the leaves are labeled with the value of the heuristic function, h .

Which node (use the node's letter) will be expanded next by each of the following search algorithms?

- (a) Depth-first search
- (b) Breadth-first search
- (c) Uniform-cost search
- (d) Greedy search
- (e) A* search



Depth-first search

Node queue: initialization

#	state	depth	path cost	parent #
---	-------	-------	-----------	----------

1	A	0	0	--
---	---	---	---	----

Depth-first search

Node queue: add successors to queue front; empty queue from top

#	state	depth	path cost	parent #
2	B	1	3	1
3	C	1	19	1
4	D	1	5	1
1	A	0	0	--

Depth-first search

Node queue: add successors to queue front; empty queue from top

#	state	depth	path cost	parent #
5	E	2	7	2
6	F	2	8	2
7	G	2	8	2
8	H	2	9	2
2	B	1	3	1
3	C	1	19	1
4	D	1	5	1
1	A	0	0	--

Depth-first search

Node queue: add successors to queue front; empty queue from top

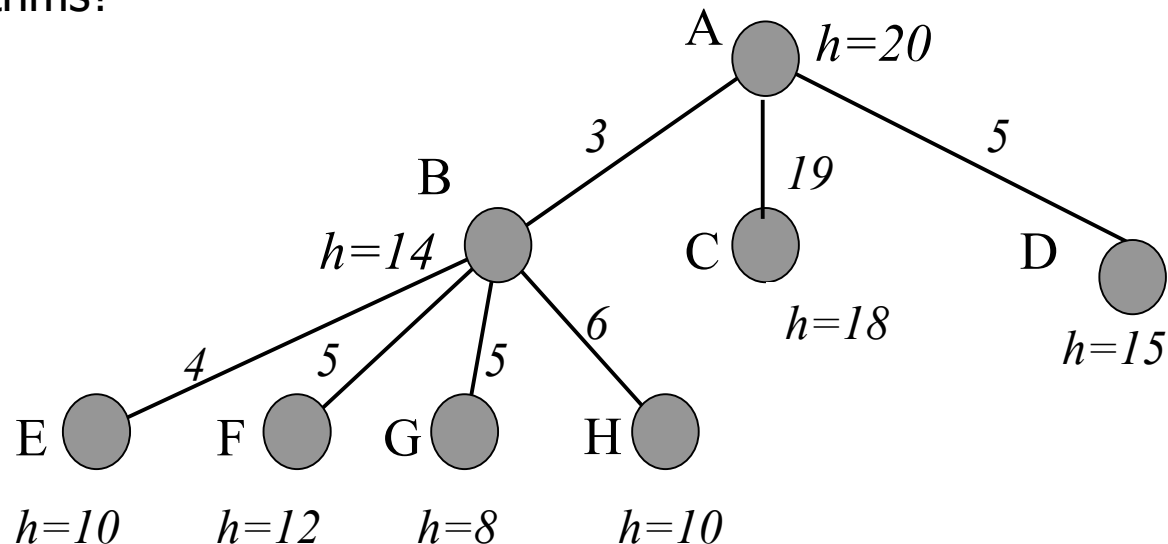
#	state	depth	path cost	parent #
5	E	2	7	2
6	F	2	8	2
7	G	2	8	2
8	H	2	9	2
2	B	1	3	1
3	C	1	19	1
4	D	1	5	1
1	A	0	0	--

Exercise: Search Algorithms

The following figure shows a portion of a partially expanded search tree. Each arc between nodes is labeled with the cost of the corresponding operator, and the leaves are labeled with the value of the heuristic function, h .

Which node (use the node's letter) will be expanded next by each of the following search algorithms?

- (a) Depth-first search
- (b) Breadth-first search
- (c) Uniform-cost search
- (d) Greedy search
- (e) A* search



Breadth-first search

Node queue: initialization

#	state	depth	path cost	parent #
1	A	0	0	--

Breadth-first search

Node queue: add successors to queue end; empty queue from top

#	state	depth	path cost	parent #
1	A	0	0	--
2	B	1	3	1
3	C	1	19	1
4	D	1	5	1

Breadth-first search

Node queue: add successors to queue end; empty queue from top

#	state	depth	path cost	parent #
1	A	0	0	--
2	B	1	3	1
3	C	1	19	1
4	D	1	5	1
5	E	2	7	2
6	F	2	8	2
7	G	2	8	2
8	H	2	9	2

Breadth-first search

Node queue: add successors to queue end; empty queue from top

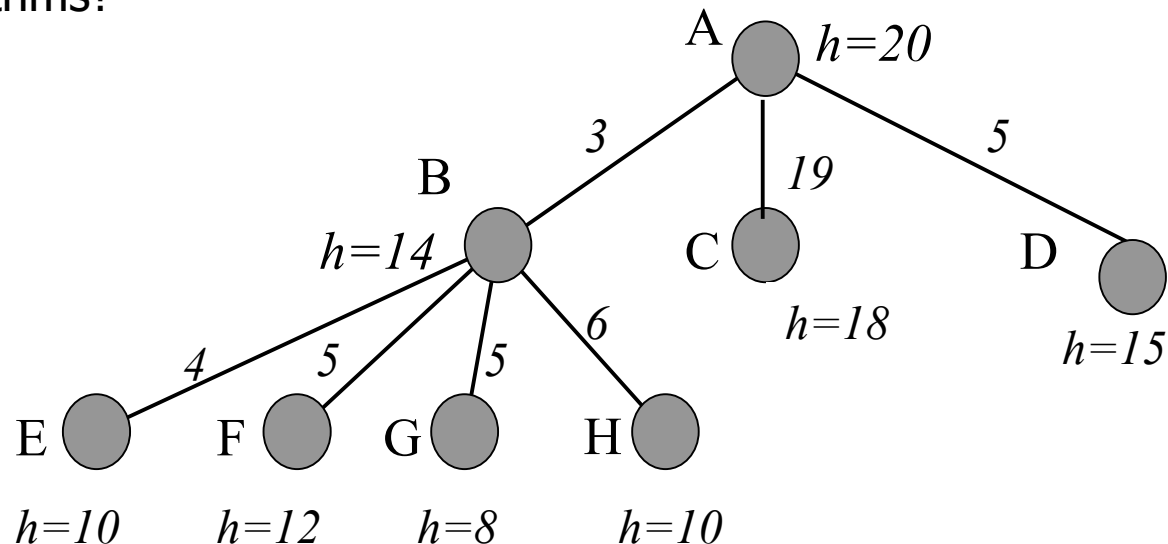
#	state	depth	path cost	parent #
1	A	0	0	--
2	B	1	3	1
3	C	1	19	1
4	D	1	5	1
5	E	2	7	2
6	F	2	8	2
7	G	2	8	2
8	H	2	9	2

Exercise: Search Algorithms

The following figure shows a portion of a partially expanded search tree. Each arc between nodes is labeled with the cost of the corresponding operator, and the leaves are labeled with the value of the heuristic function, h .

Which node (use the node's letter) will be expanded next by each of the following search algorithms?

- (a) Depth-first search
- (b) Breadth-first search
- (c) Uniform-cost search
- (d) Greedy search
- (e) A* search



Uniform-cost search

Node queue: initialization

#	state	depth	path cost	parent #
1	A	0	0	--

Uniform-cost search

Node queue: add successors to queue so that entire queue is sorted by path cost so far; empty queue from top

#	state	depth	path cost	parent #
1	A	0	0	--
2	B	1	3	1
3	D	1	5	1
4	C	1	19	1

Uniform-cost search

Node queue: add successors to queue so that entire queue is sorted by path cost so far; empty queue from top

#	state	depth	path cost	parent #
1	A	0	0	--
2	B	1	3	1
3	D	1	5	1
5	E	2	7	2
6	F	2	8	2
7	G	2	8	2
8	H	2	9	2
4	C	1	19	1

Uniform-cost search

Node queue: add successors to queue so that entire queue is sorted by path cost so far; empty queue from top

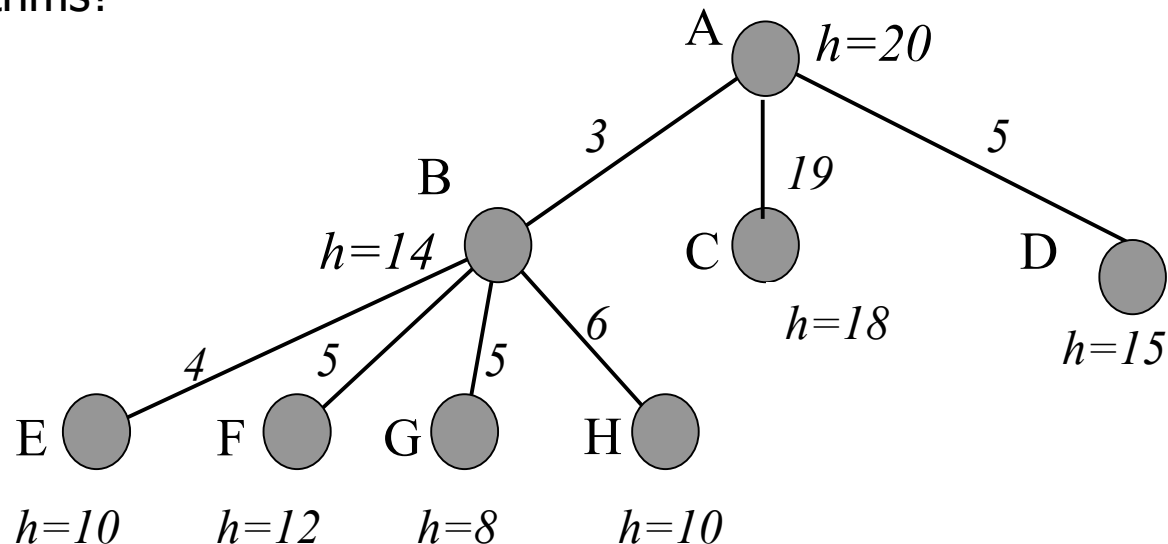
#	state	depth	path cost	parent #
1	A	0	0	--
2	B	1	3	1
3	D	1	5	1
5	E	2	7	2
6	F	2	8	2
7	G	2	8	2
8	H	2	9	2
4	C	1	19	1

Exercise: Search Algorithms

The following figure shows a portion of a partially expanded search tree. Each arc between nodes is labeled with the cost of the corresponding operator, and the leaves are labeled with the value of the heuristic function, h .

Which node (use the node's letter) will be expanded next by each of the following search algorithms?

- (a) Depth-first search
- (b) Breadth-first search
- (c) Uniform-cost search
- (d) Greedy search
- (e) A* search



Greedy search

Node queue: initialization

#	state	depth	path cost	cost to goal	total cost	parent #
1	A	0	0	20	20	--

Greedy search

Node queue: Add successors to queue, sorted by cost to goal.

#	state	depth	path cost	cost to goal	total cost	parent #
1	A	0	0	20	20	--
2	B	1	3	14	17	1
3	D	1	5	15	20	1
4	C	1	19	18	37	1

↑
Sort key

Greedy search

Node queue: Add successors to queue, sorted by cost to goal.

#	state	depth	path cost	cost to goal	total cost	parent #
1	A	0	0	20	20	--
2	B	1	3	14	17	1
5	G	2	8	8	16	2
7	E	2	7	10	17	2
6	H	2	9	10	19	2
8	F	2	8	12	20	2
3	D	1	5	15	20	1
4	C	1	19	18	37	1

Greedy search

Node queue: Add successors to queue, sorted by cost to goal.

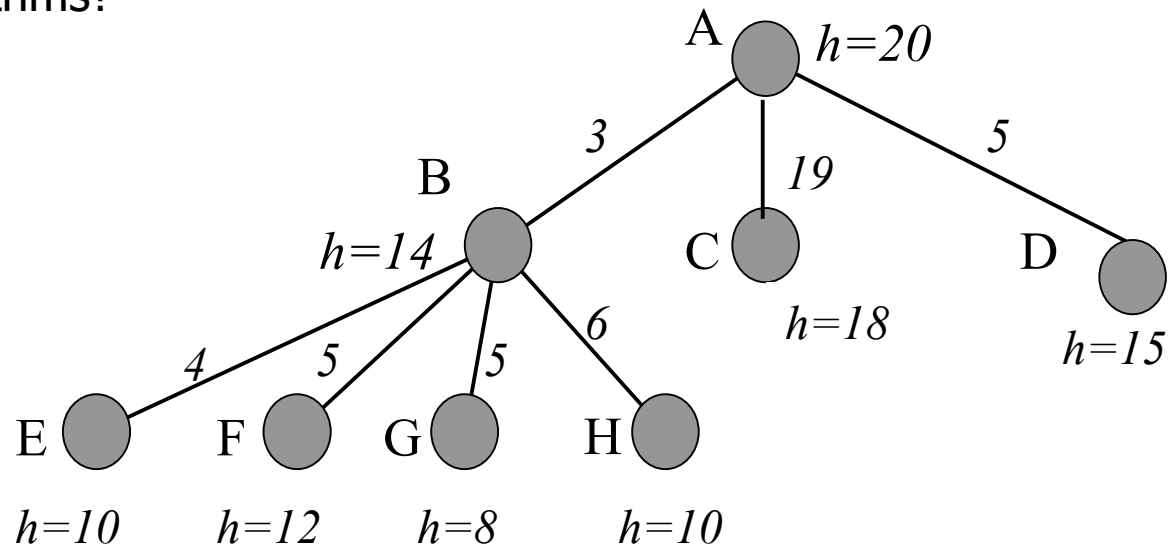
#	state	depth	path cost	cost to goal	total cost	parent #
1	A	0	0	20	20	--
2	B	1	3	14	17	1
5	G	2	8	8	16	2
7	E	2	7	10	17	2
6	H	2	9	10	19	2
8	F	2	8	12	20	2
3	D	1	5	15	20	1
4	C	1	19	18	37	1

Exercise: Search Algorithms

The following figure shows a portion of a partially expanded search tree. Each arc between nodes is labeled with the cost of the corresponding operator, and the leaves are labeled with the value of the heuristic function, h .

Which node (use the node's letter) will be expanded next by each of the following search algorithms?

- (a) Depth-first search
- (b) Breadth-first search
- (c) Uniform-cost search
- (d) Greedy search
- (e) A* search



A* search

Node queue: initialization

#	state	depth	path cost	cost to goal	total cost	parent #
1	A	0	0	20	20	--

A* search

Node queue: Add successors to queue, sorted by total cost.

#	state	depth	path cost	cost to goal	total cost	parent #
1	A	0	0	20	20	--
2	B	1	3	14	17	1
3	D	1	5	15	20	1
4	C	1	19	18	37	1

↑
Sort key

A* search

Node queue: Add successors to queue front, sorted by total cost.

#	state	depth	path cost	cost to goal	total cost	parent #
1	A	0	0	20	20	--
2	B	1	3	14	17	1
5	G	2	8	8	16	2
6	E	2	7	10	17	2
7	H	2	9	10	19	2
3	D	1	5	15	20	1
8	F	2	8	12	20	2
4	C	1	19	18	37	1

A* search

Node queue: Add successors to queue front, sorted by total cost.

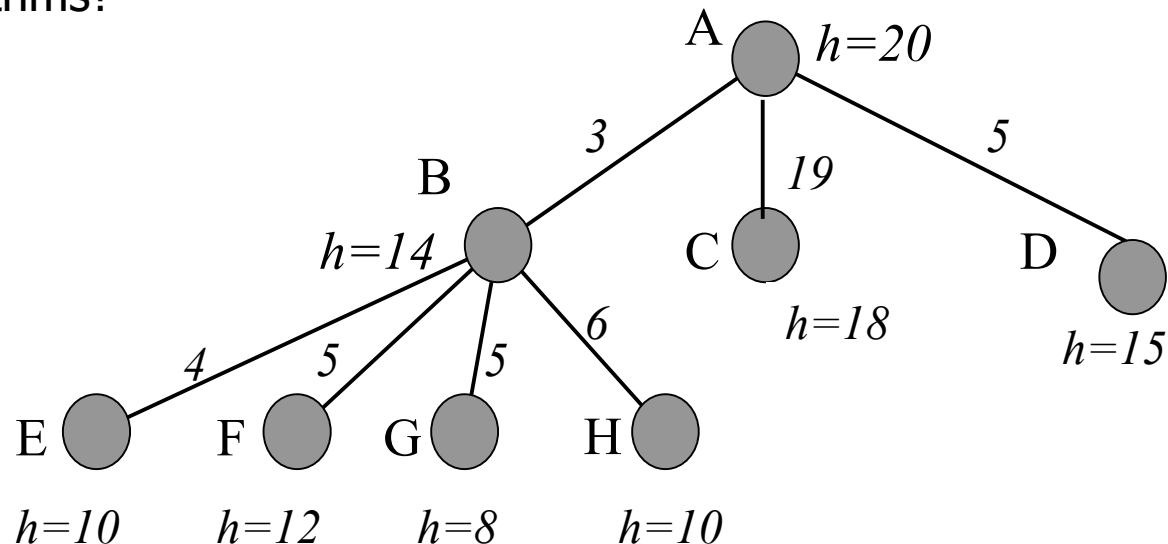
#	state	depth	path cost	cost to goal	total cost	parent #
1	A	0	0	20	20	--
2	B	1	3	14	17	1
5	G	2	8	8	16	2
6	E	2	7	10	17	2
7	H	2	9	10	19	2
3	D	1	5	15	20	1
8	F	2	8	12	20	2
4	C	1	19	18	37	1

Exercise: Search Algorithms

The following figure shows a portion of a partially expanded search tree. Each arc between nodes is labeled with the cost of the corresponding operator, and the leaves are labeled with the value of the heuristic function, h .

Which node (use the node's letter) will be expanded next by each of the following search algorithms?

- (a) Depth-first search
- (b) Breadth-first search
- (c) Uniform-cost search
- (d) Greedy search
- (e) A* search



Last time: Simulated annealing algorithm

- Idea: Escape local extrema by allowing “bad moves,” but gradually decrease their size and frequency.

```
function SIMULATED-ANNEALING(problem, schedule) returns a solution state
  inputs: problem, a problem
           schedule, a mapping from time to “temperature”
  local variables: current, a node
                    next, a node
                    T, a “temperature” controlling the probability of downward steps

  current ← MAKE-NODE(INITIAL-STATE[problem])
  for t ← 1 to ∞ do
    T ← schedule[t]
    if T=0 then return current
    next ← a randomly selected successor of current
     $\Delta E$  ← VALUE[next] - VALUE[current]
    if  $\Delta E > 0$  then current ← next
    else current ← next only with probability  $e^{\Delta E/T}$ 
```

Note: goal here is to maximize E.

Last time: Simulated annealing algorithm

- Idea: Escape local extrema by allowing “bad moves,” but gradually decrease their size and frequency.

```
function SIMULATED-ANNEALING(problem, schedule) returns a solution state
  inputs: problem, a problem
           schedule, a mapping from time to “temperature”
  local variables: current, a node
                    next, a node
                    T, a “temperature” controlling the probability of downward steps

  current ← MAKE-NODE(INITIAL-STATE[problem])
  for t ← 1 to ∞ do
    T ← schedule[t]
    if T=0 then return current
    next ← a randomly selected successor of current
     $\Delta E$  ← VALUE[next] - VALUE[current]
    if  $\Delta E < 0$  then current ← next
    else current ← next only with probability  $e^{-\Delta E/T}$ 
```

Algorithm when goal is to minimize E.

This time: Outline

- **Game playing**
 - The minimax algorithm
 - Resource limitations
 - alpha-beta pruning
 - Elements of chance



What kind of games?



- **Abstraction:** To describe a game we must capture every relevant aspect of the game. Such as:
 - Chess
 - Tic-tac-toe
 - ...
- **Accessible environments:** Such games are characterized by perfect information
- **Search:** game-playing then consists of a search through possible game positions
- **Unpredictable opponent:** introduces **uncertainty** thus game-playing must deal with **contingency problems**

Searching for the next move

- **Complexity:** many games have a huge search space
 - **Chess:** $b = 35, m=100 \Rightarrow nodes = 35^{100}$
if each node takes about 1 ns to explore
then each move will take about **10⁵⁰ millennia**
to calculate.
- **Resource (e.g., time, memory) limit:** optimal solution not feasible/possible, thus must approximate
- 1. **Pruning:** makes the search more efficient by discarding portions of the search tree that cannot improve quality result.
- 2. **Evaluation functions:** heuristics to evaluate utility of a state without exhaustive search.

Two-player games



- A game formulated as a search problem:
 - Initial state: ?
 - Operators: ?
 - Terminal state: ?
 - Utility function: ?

Two-player games



- A game formulated as a search problem:

- Initial state: board position and turn
- Operators: definition of legal moves
- Terminal state: conditions for when game is over
- Utility function: a numeric value that describes the outcome of the game. E.g., -1, 0, 1 for loss, draw, win.
(AKA **payoff function**)

Game vs. search problem



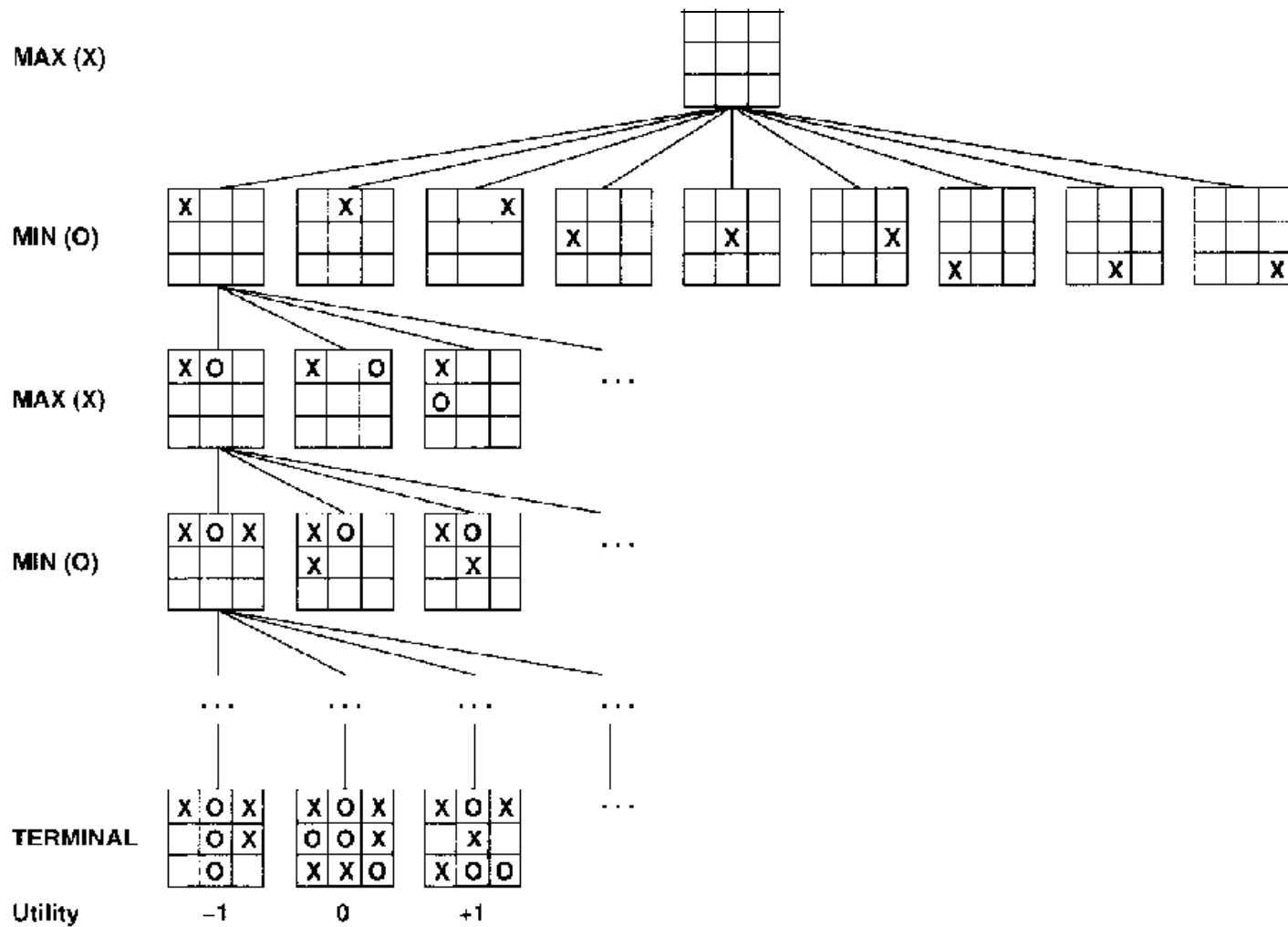
“Unpredictable” opponent \Rightarrow solution is a contingency plan

Time limits \Rightarrow unlikely to find goal, must approximate

Plan of attack:

- algorithm for perfect play (Von Neumann, 1944)
- finite horizon, approximate evaluation (Zuse, 1945; Shannon, 1950; Samuel, 1952–57)
- pruning to reduce costs (McCarthy, 1956)

Example: Tic-Tac-Toe

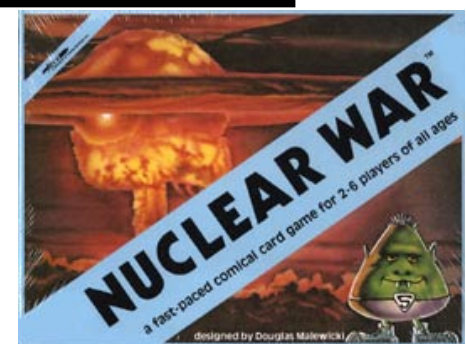
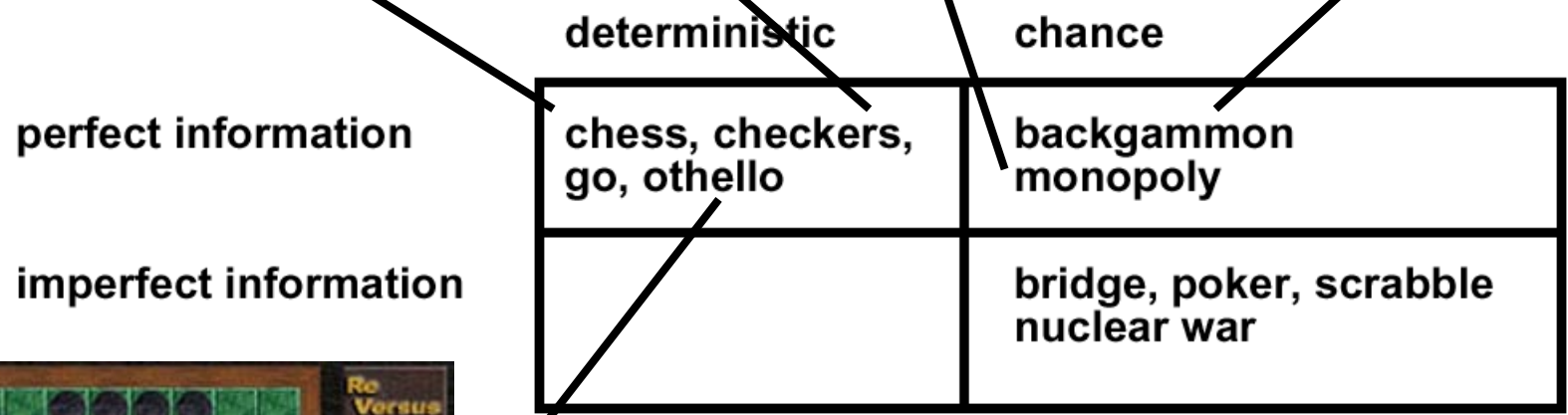
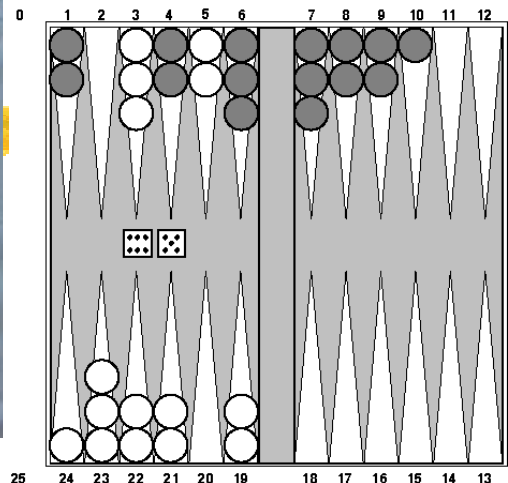

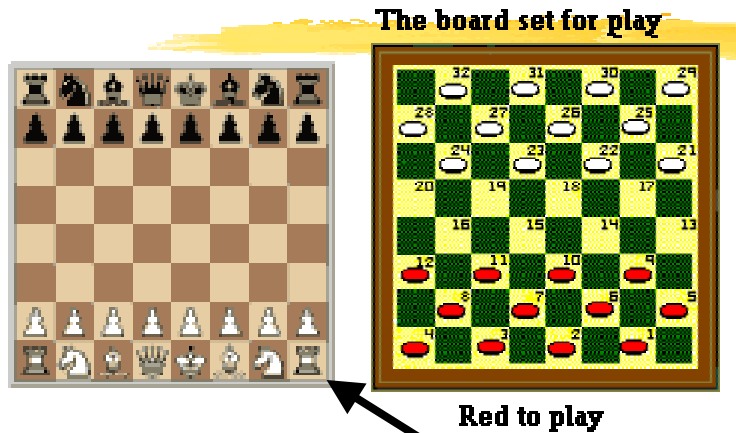


Type of games



	deterministic	chance
perfect information	chess, checkers, go, othello	backgammon monopoly
imperfect information		bridge, poker, scrabble nuclear war

Type of games

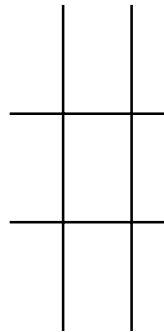


The minimax algorithm

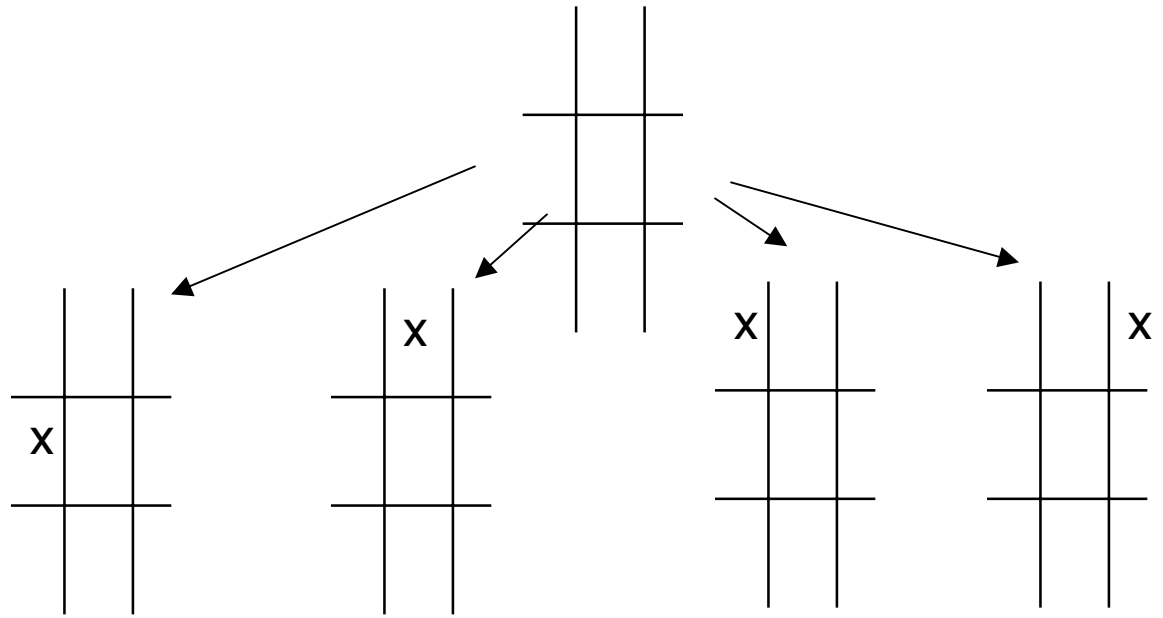


- Perfect play for deterministic environments with perfect information
- **Basic idea:** choose move with highest minimax value
= best achievable payoff against best play
- **Algorithm:**
 1. Generate game tree completely
 2. Determine utility of each terminal state
 3. Propagate the utility values upward in the tree by applying MIN and MAX operators on the nodes in the current level
 4. At the root node use minimax decision to select the move with the max (of the min) utility value
- Steps 2 and 3 in the algorithm assume that the opponent will play perfectly.

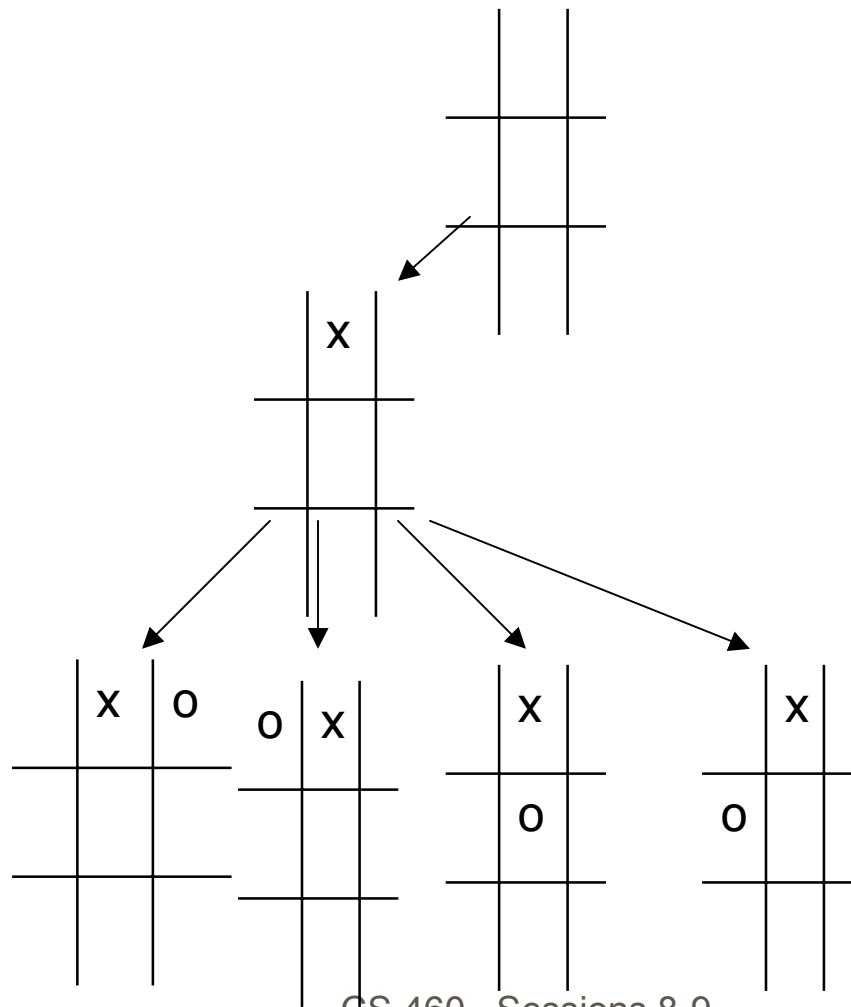
Generate Game Tree



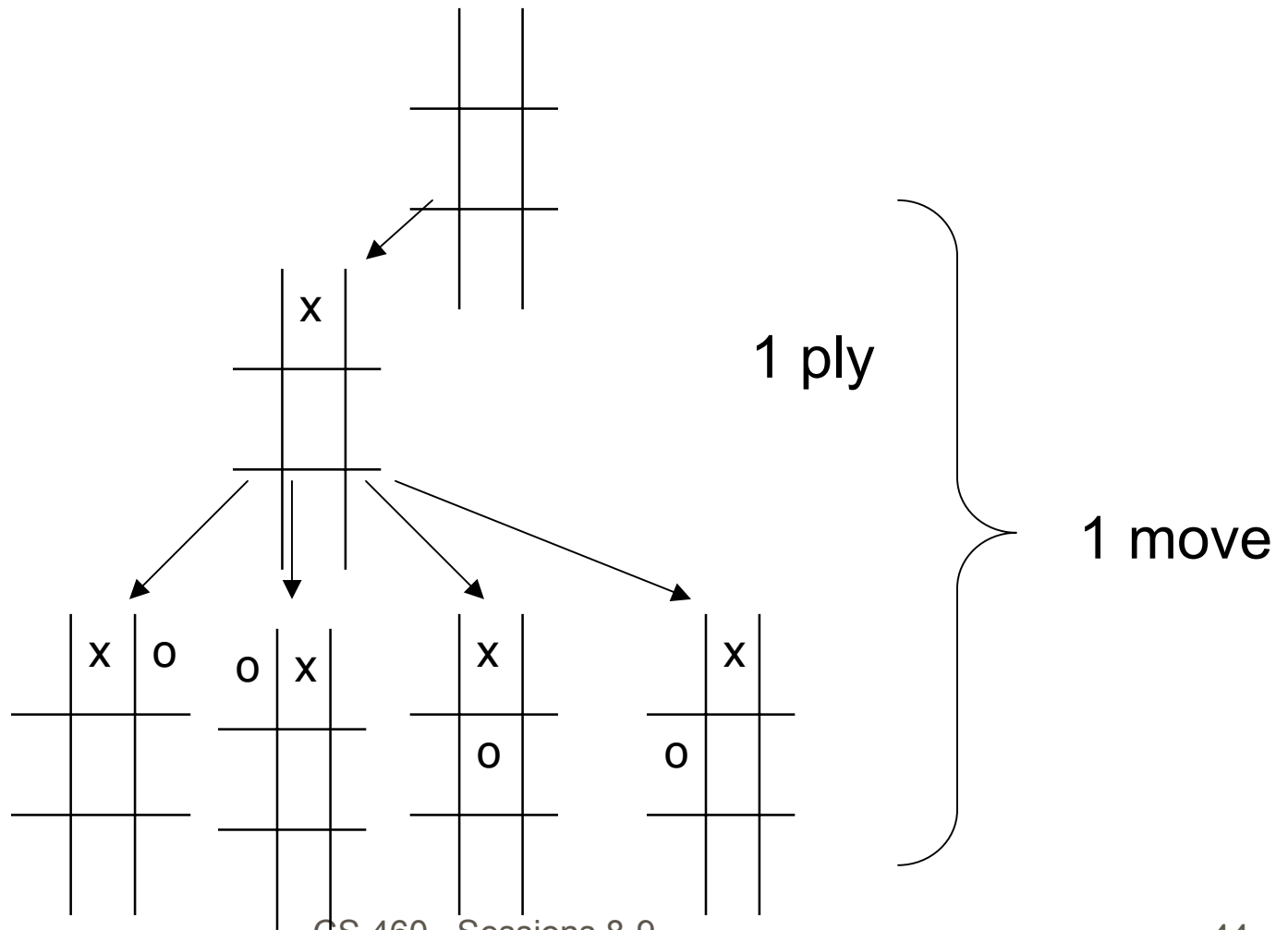
Generate Game Tree



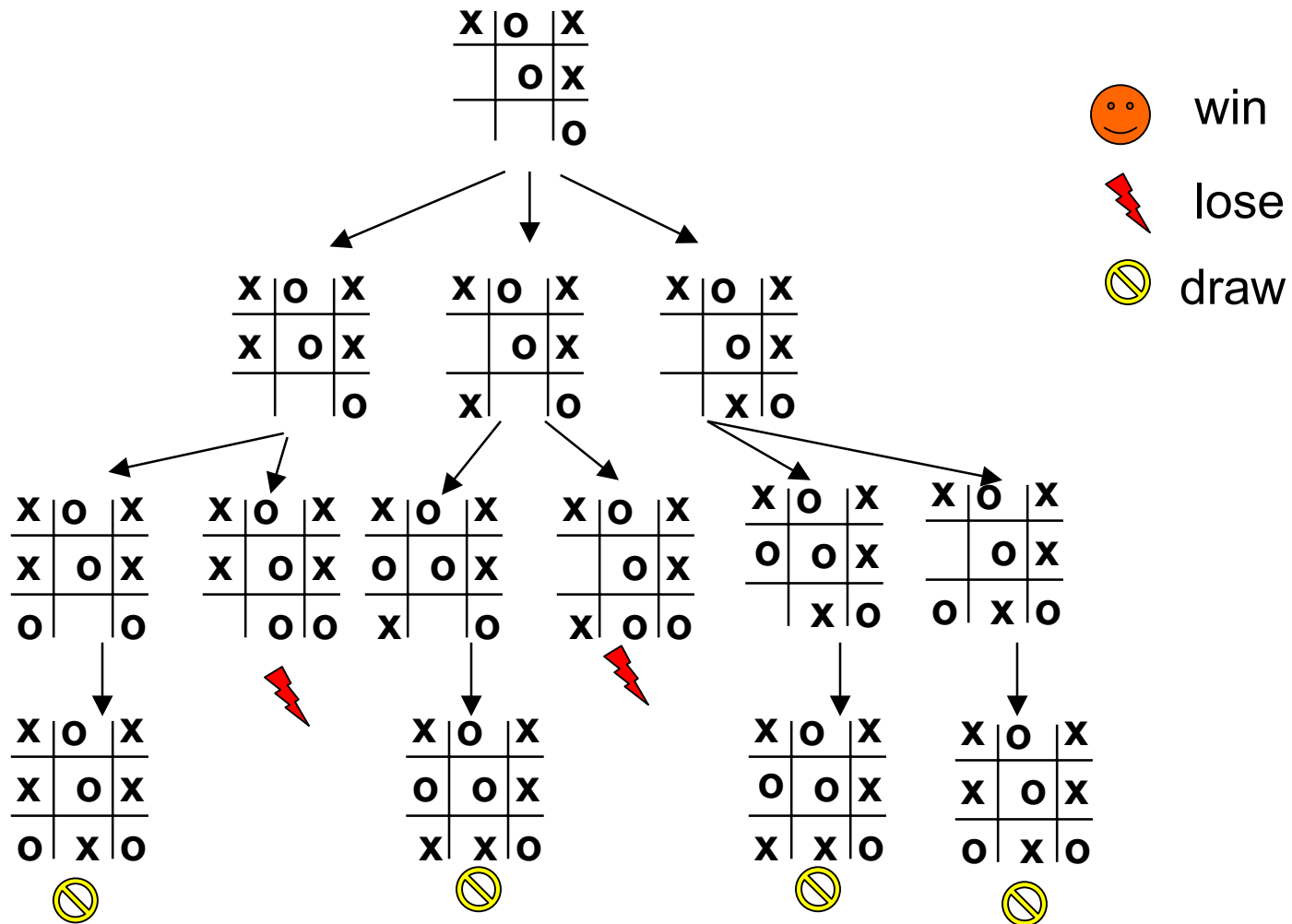
Generate Game Tree



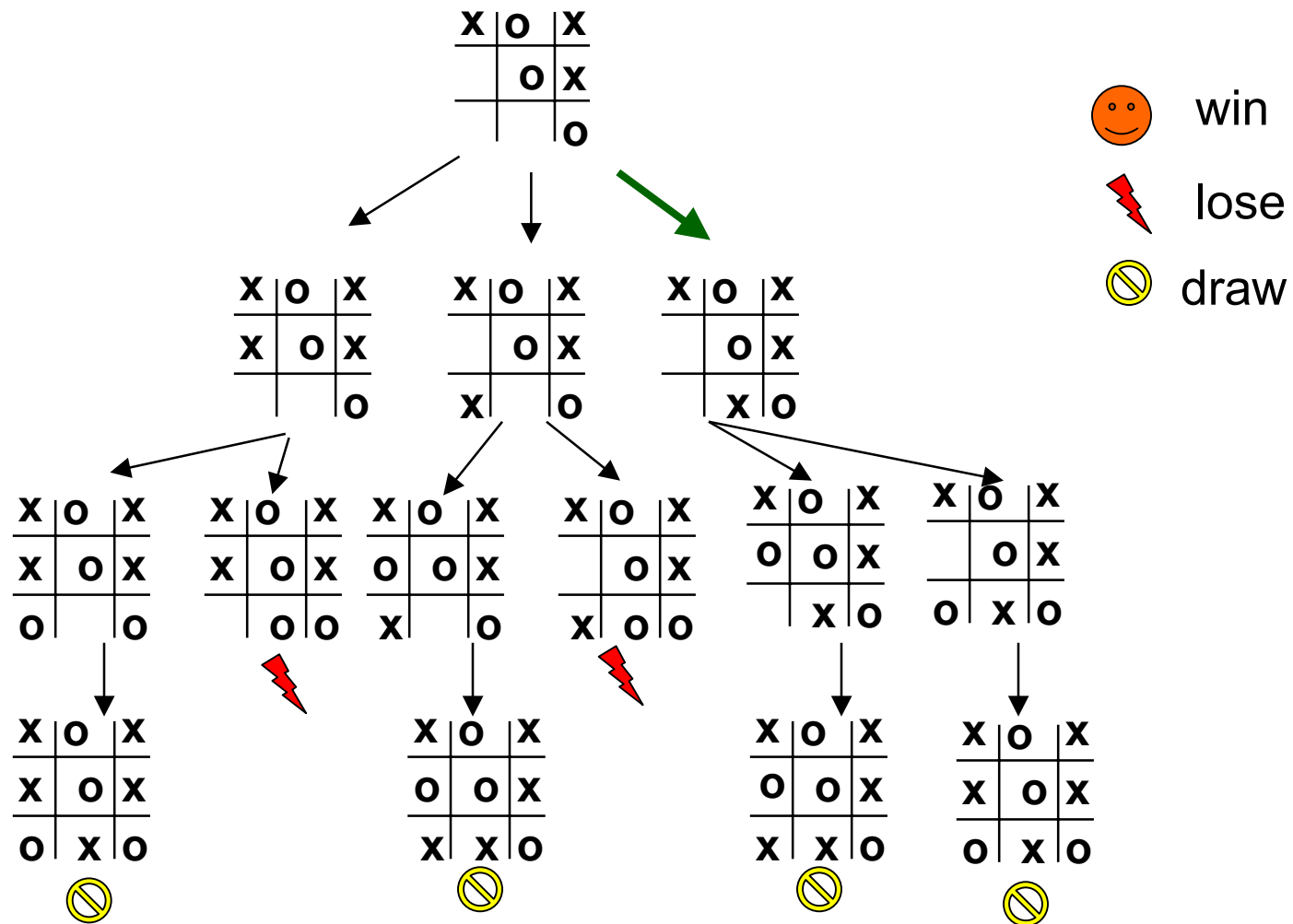
Generate Game Tree



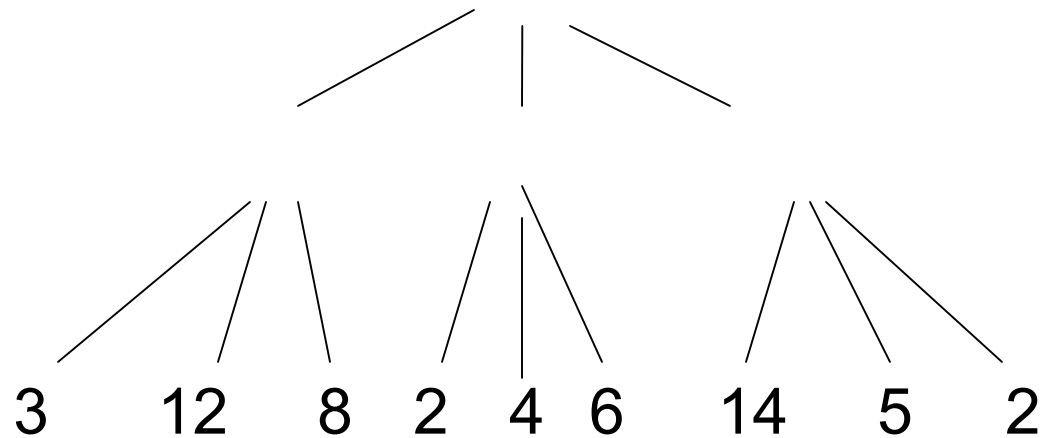
A subtree



What is a good move?

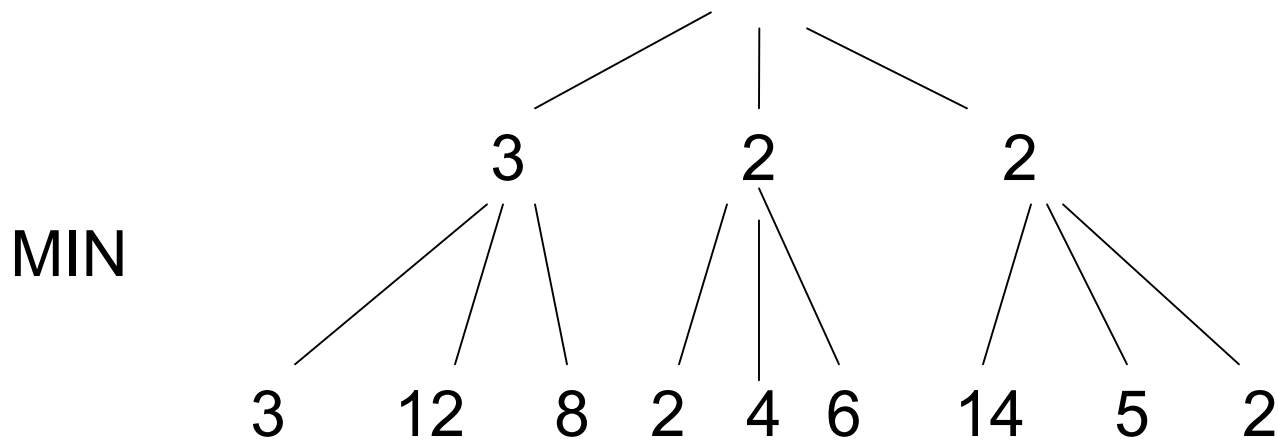


Minimax



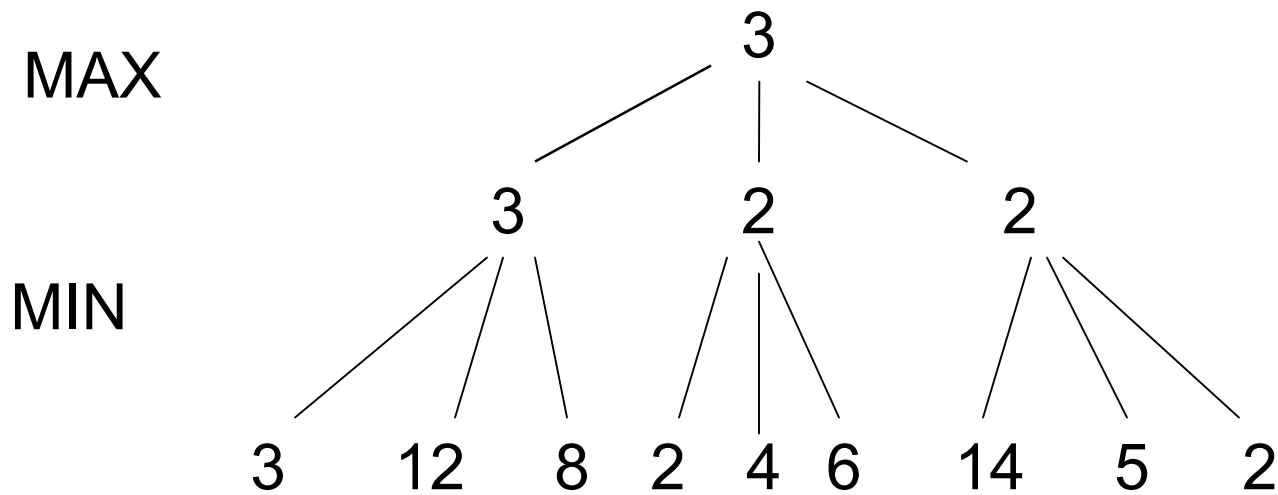
- Minimize opponent's chance
- Maximize your chance

Minimax



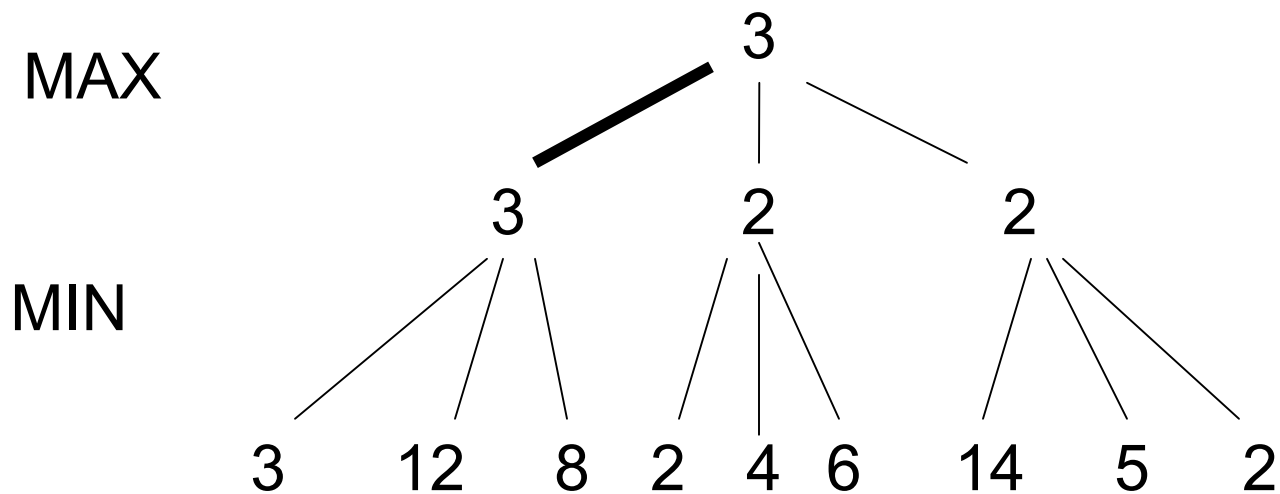
- Minimize opponent's chance
- Maximize your chance

Minimax



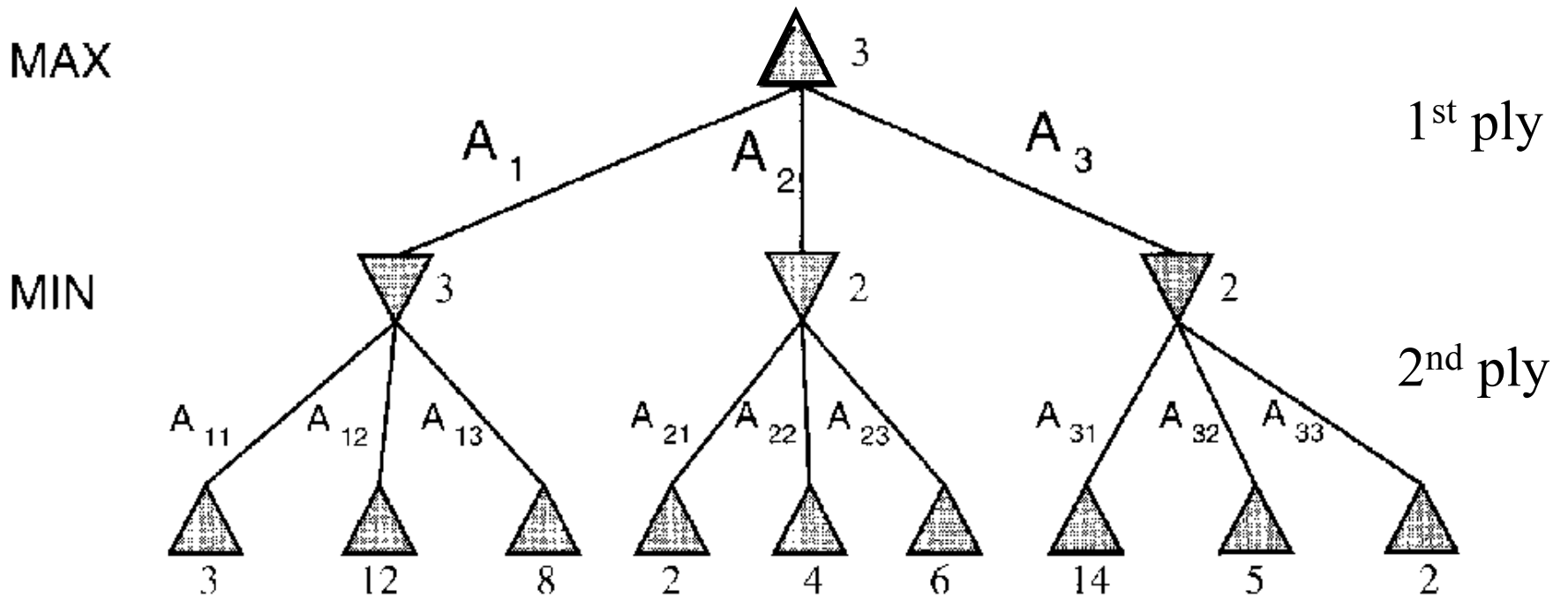
- Minimize opponent's chance
- Maximize your chance

Minimax



- Minimize opponent's chance
- Maximize your chance

minimax = maximum of the minimum



Minimax: Recursive implementation

```
function MINIMAX-DECISION(game) returns an operator  
  for each op in OPERATORS[game] do  
    VALUE[op] ← MINIMAX-VALUE(APPLY(op, game), game)  
  end  
  return the op with the highest VALUE[op]
```

```
function MINIMAX-VALUE(state, game) returns a utility value  
  if TERMINAL-TEST[game](state) then  
    return UTILITY[game](state)  
  else if MAX is to move in state then  
    return the highest MINIMAX-VALUE of SUCCESSORS(state)  
  else  
    return the lowest MINIMAX-VALUE of SUCCESSORS(state)
```

Complete: ?

Optimal: ?

Time complexity: ?

Space complexity: ?

Minimax: Recursive implementation

```
function MINIMAX-DECISION(game) returns an operator
  for each op in OPERATORS[game] do
    VALUE[op] ← MINIMAX-VALUE(APPLY(op, game), game)
  end
  return the op with the highest VALUE[op]



---


function MINIMAX-VALUE(state, game) returns a utility value
  if TERMINAL-TEST[game](state) then
    return UTILITY[game](state)
  else if MAX is to move in state then
    return the highest MINIMAX-VALUE of SUCCESSORS(state)
  else
    return the lowest MINIMAX-VALUE of SUCCESSORS(state)
```

Complete: Yes, for finite state-space

Optimal: Yes

Time complexity: $O(b^m)$

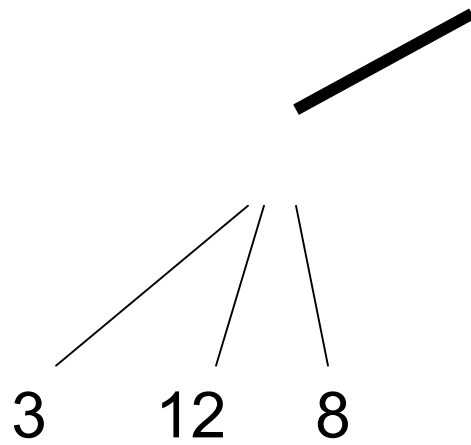
Space complexity: $O(bm)$ (= DFS
Does not keep all nodes in memory.)

Do We Have To Do All That Work?

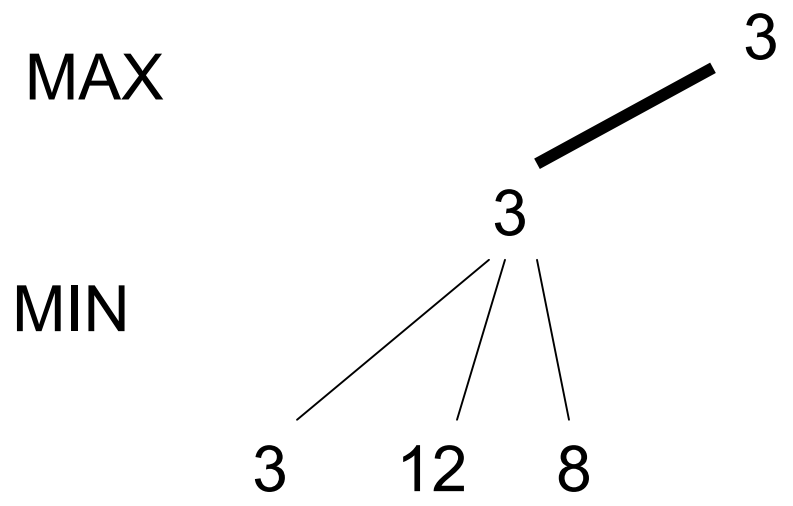


MAX

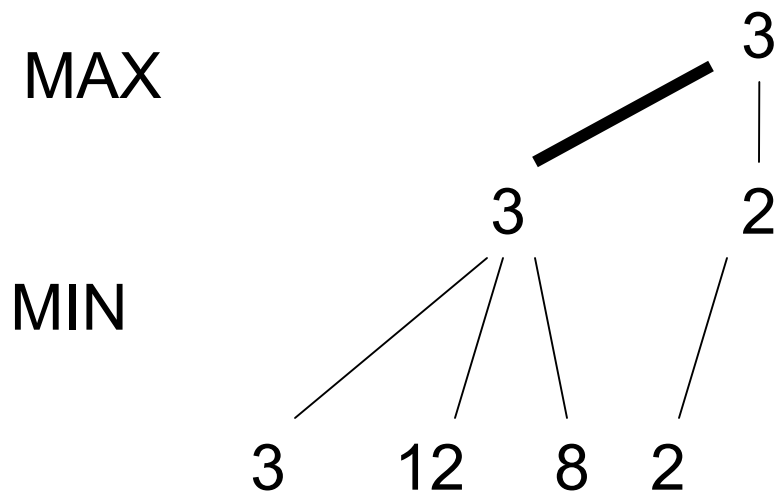
MIN



Do We Have To Do All That Work?

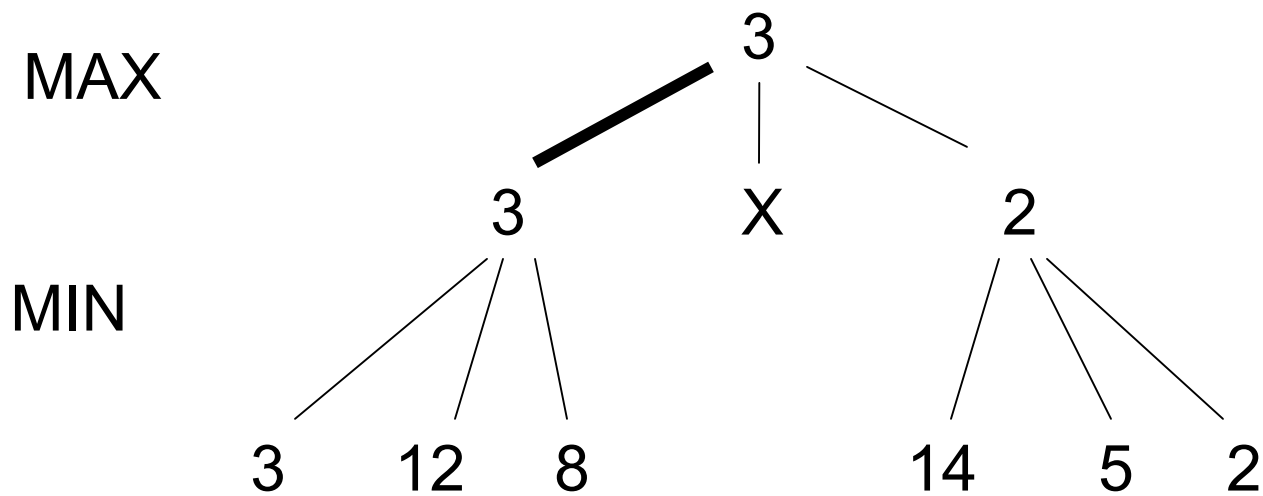


Do We Have To Do All That Work?



Since 2 is smaller than 3, then there is no need for further search

Do We Have To Do All That Work?




More on this next time: α - β pruning

1. Move evaluation without complete search




- Complete search is too complex and impractical
- **Evaluation function:** evaluates value of state using **heuristics** and cuts off search
- **New MINIMAX:**
 - **CUTOFF-TEST:** cutoff test to replace the termination condition (e.g., deadline, depth-limit, etc.)
 - **EVAL:** evaluation function to replace utility function (e.g., number of chess pieces taken)

Evaluation functions



Black to move

White slightly better



White to move

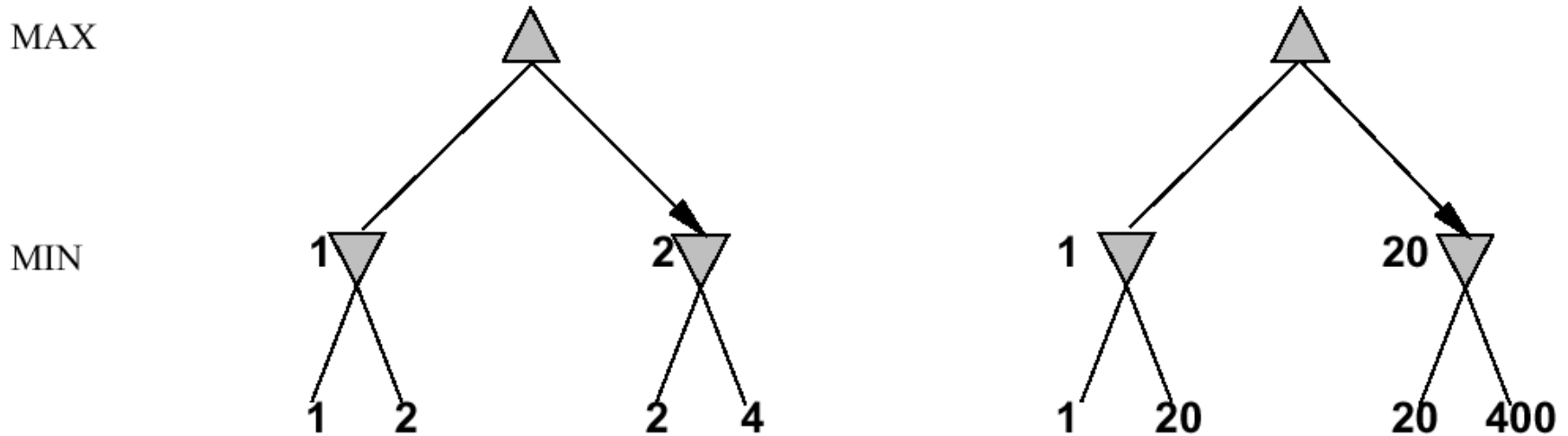
Black winning

- **Weighted linear evaluation function:** to combine n heuristics

$$f = w_1f_1 + w_2f_2 + \dots + w_nf_n$$

E.g, w 's could be the values of pieces (1 for prawn, 3 for bishop etc.)
 f 's could be the number of type of pieces on the board

Note: exact values do not matter



Behaviour is preserved under any *monotonic* transformation of `EVAL`

Only the order matters:

payoff in deterministic games acts as an *ordinal utility* function

Minimax with cutoff: viable algorithm?

MINIMAXCUTOFF is identical to MINIMAXVALUE except

1. TERMINAL? is replaced by CUTOFF?
2. UTILITY is replaced by EVAL

Does it work in practice?

$$b^m = 10^6, \quad b = 35 \quad \Rightarrow \quad m = 4$$

4-ply lookahead is a hopeless chess player!

4-ply \approx human novice

8-ply \approx typical PC, human master

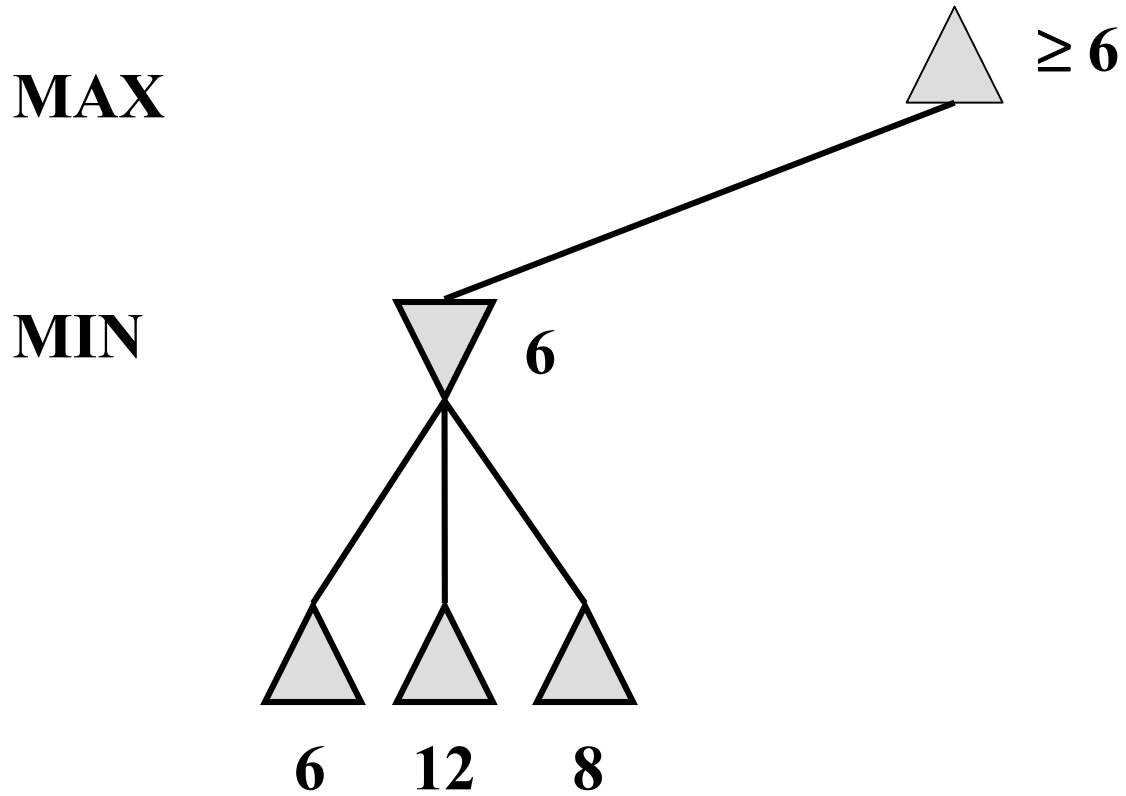
12-ply \approx Deep Blue, Kasparov

Assume we have
100 seconds,
evaluate 10^4
nodes/s; can
evaluate 10^6
nodes/move

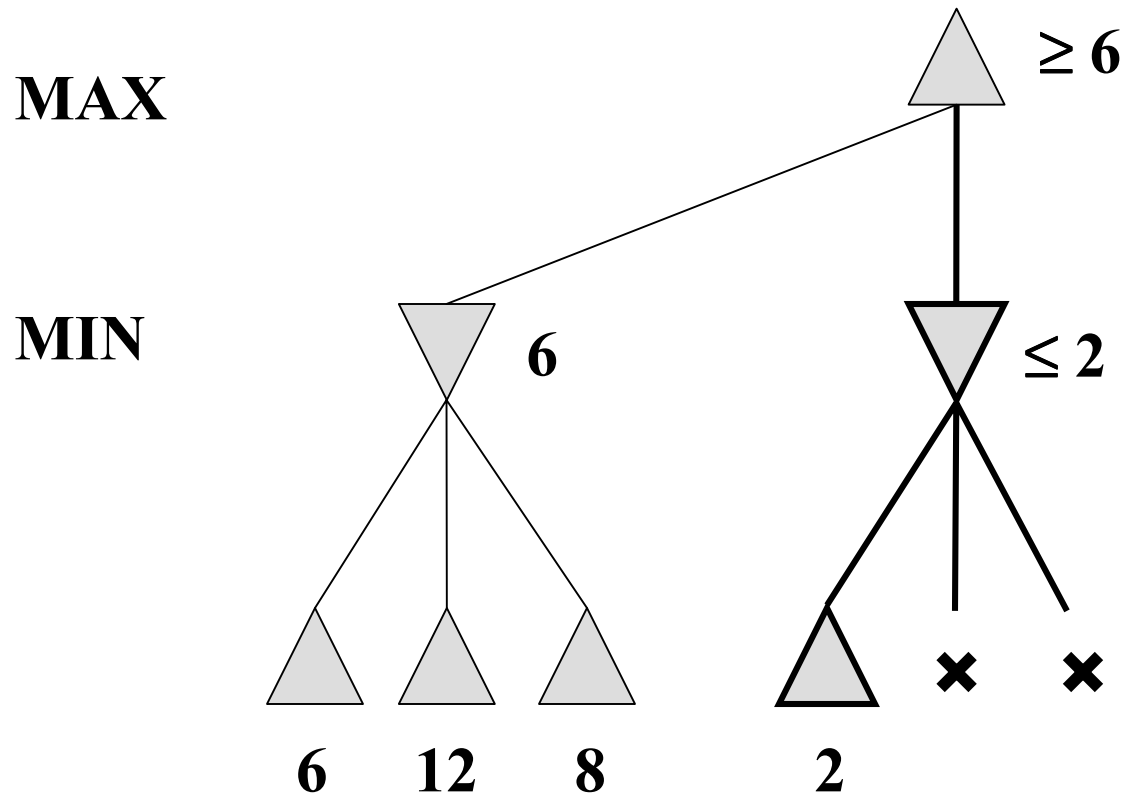
2. α - β pruning: search cutoff

- **Pruning:** eliminating a branch of the search tree from consideration without exhaustive examination of each node
- **α - β pruning:** the basic idea is to prune portions of the search tree that cannot improve the utility value of the max or min node, by just considering the values of nodes seen so far.
- Does it work? Yes, in roughly cuts the branching factor from b to \sqrt{b} resulting in double as far look-ahead than pure minimax

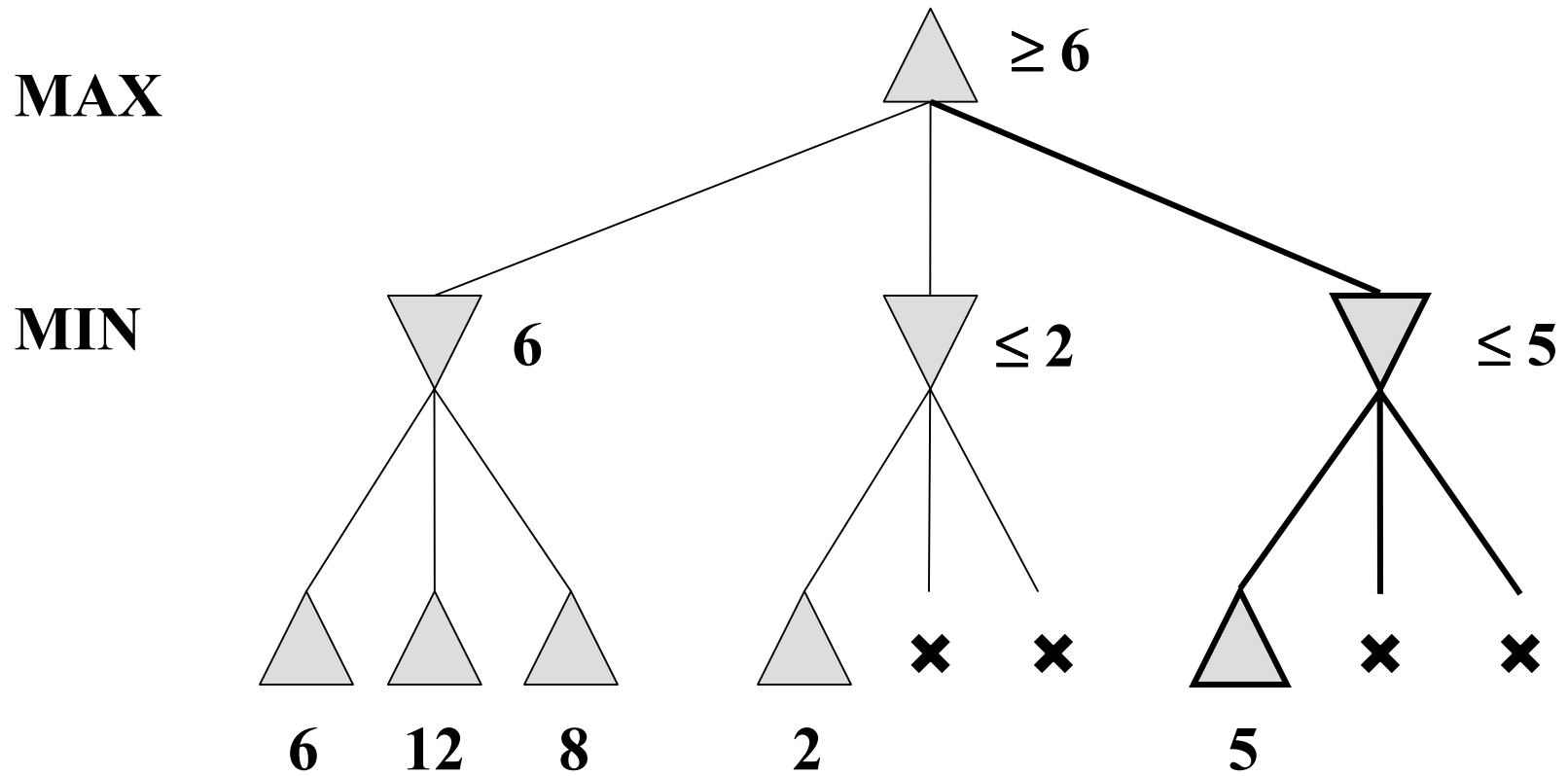
α - β pruning: example



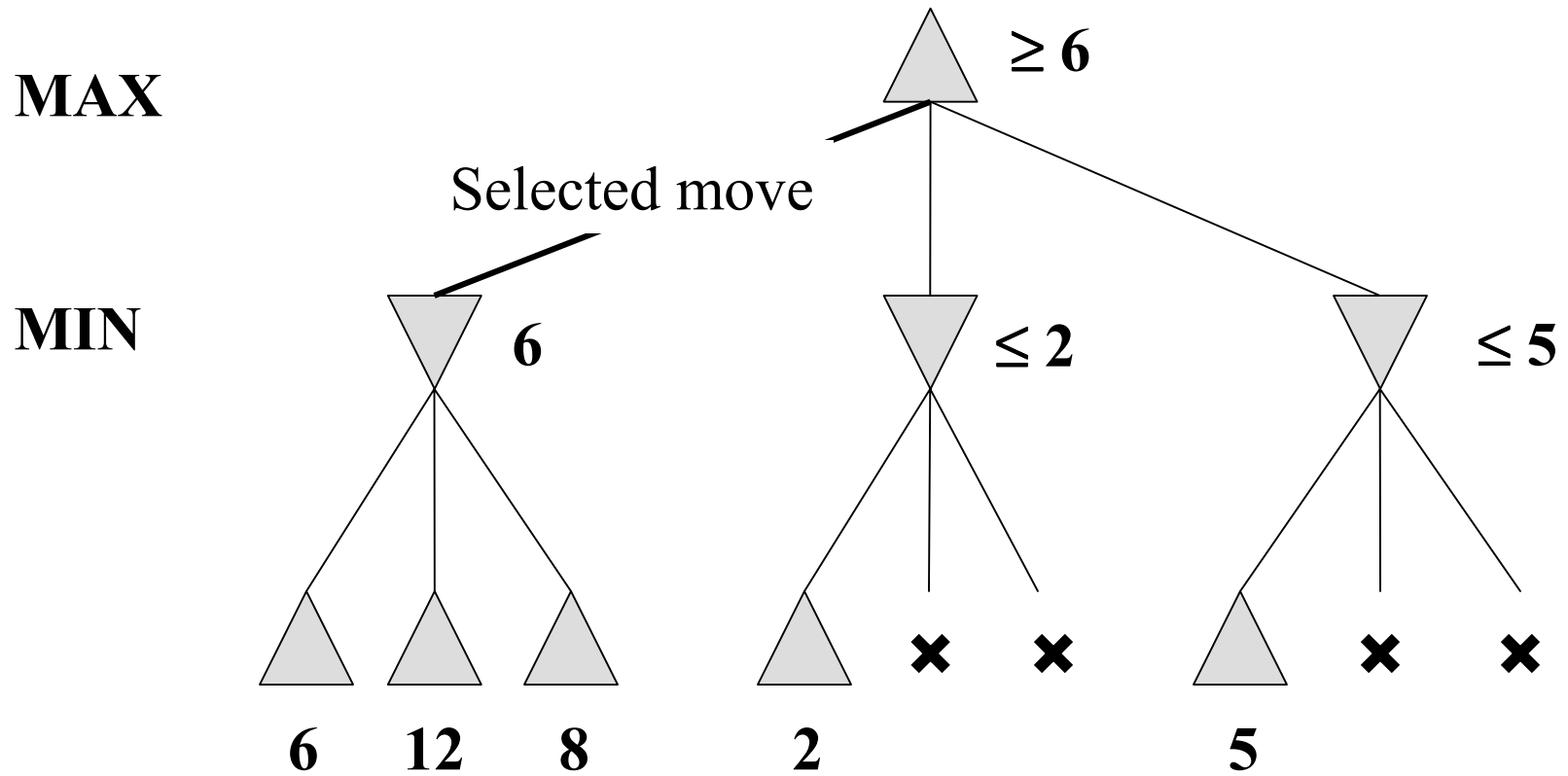
α - β pruning: example



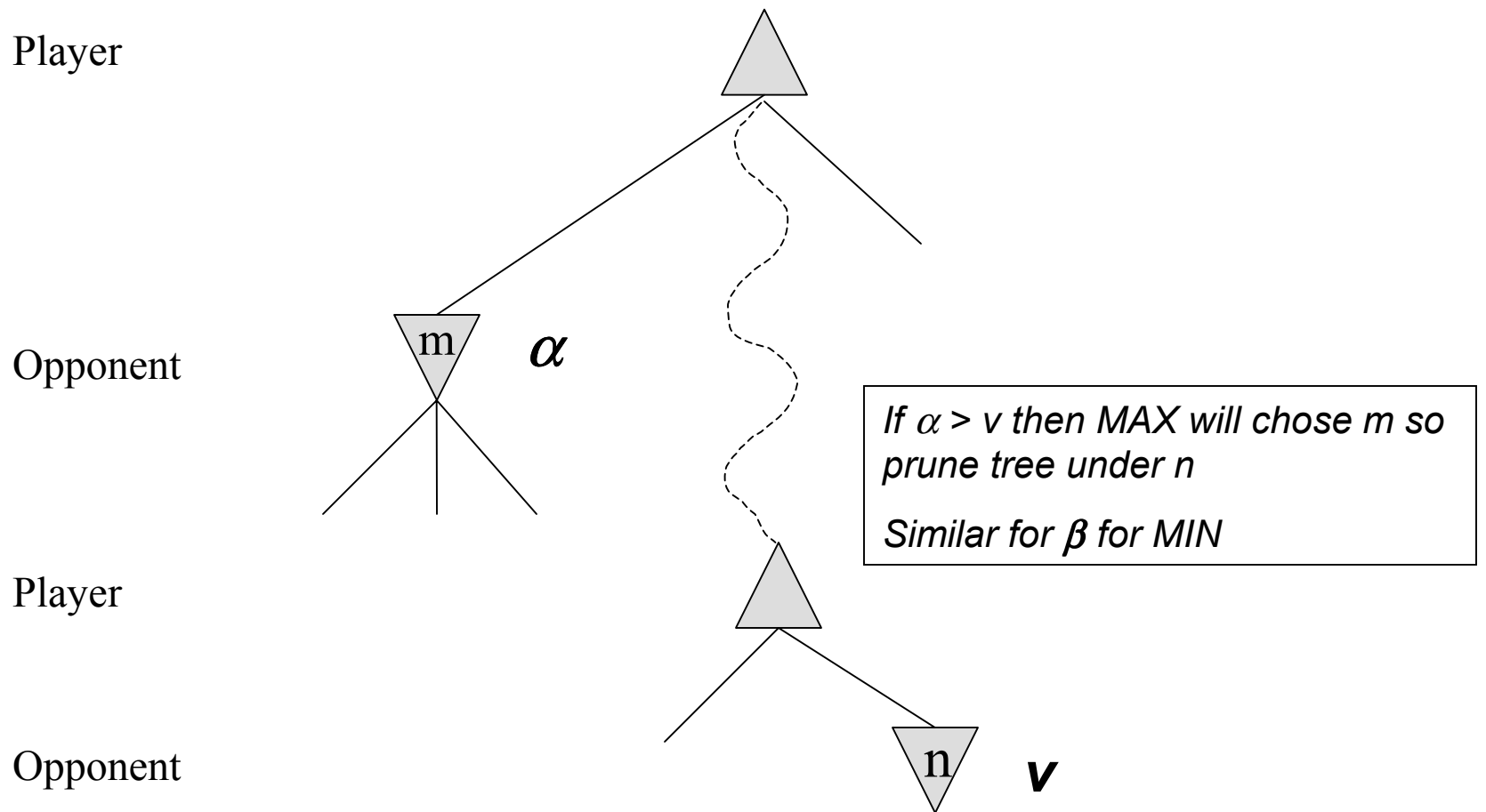
α - β pruning: example



α - β pruning: example



α - β pruning: general principle



Properties of α - β



Pruning *does not* affect final result

Good move ordering improves effectiveness of pruning

With “perfect ordering,” time complexity = $O(b^{m/2})$

⇒ *doubles* depth of search

⇒ can easily reach depth 8 and play good chess

A simple example of the value of reasoning about which computations are relevant (a form of *metareasoning*)

The α - β algorithm:

Basically MINIMAX + keep track of α , β + prune

function MAX-VALUE(*state*, *game*, α , β) **returns** the minimax value of *state*

inputs: *state*, current state in game

game, game description

α , the best score for MAX along the path to *state*

β , the best score for MIN along the path to *state*

if CUTOFF-TEST(*state*) **then return** EVAL(*state*)

for each *s* **in** SUCCESSORS(*state*) **do**

$\alpha \leftarrow \text{MAX}(\alpha, \text{MIN-VALUE}(s, \textit{game}, \alpha, \beta))$

if $\alpha \geq \beta$ **then return** β

end

return α

function MIN-VALUE(*state*, *game*, α , β) **returns** the minimax value of *state*

if CUTOFF-TEST(*state*) **then return** EVAL(*state*)

for each *s* **in** SUCCESSORS(*state*) **do**

$\beta \leftarrow \text{MIN}(\beta, \text{MAX-VALUE}(s, \textit{game}, \alpha, \beta))$

if $\beta \leq \alpha$ **then return** α

end

return β

More on the α - β algorithm



- Same basic idea as minimax, but prune (cut away) branches of the tree that we know will not contain the solution.

More on the α - β algorithm: start from Minimax

Basically MINIMAX ~~+ keep track of α , β + prune~~

function MAX-VALUE(*state*, *game*, α , β) **returns** the minimax value of *state*

inputs: *state*, current state in game

game, game description

~~α , the best score for MAX along the path to *state*~~

~~β , the best score for MIN along the path to *state*~~

if CUTOFF-TEST(*state*) **then return** EVAL(*state*)

for each *s* **in** SUCCESSORS(*state*) **do**

$\alpha \leftarrow \text{MAX}(\alpha, \text{MIN-VALUE}(s, \textit{game}, \alpha, \beta))$

~~**if** $\alpha \geq \beta$ **then return** β~~

end

return α

function MIN-VALUE(*state*, *game*, α , β) **returns** the minimax value of *state*

if CUTOFF-TEST(*state*) **then return** EVAL(*state*)

for each *s* **in** SUCCESSORS(*state*) **do**

$\beta \leftarrow \text{MIN}(\beta, \text{MAX-VALUE}(s, \textit{game}, \alpha, \beta))$

~~**if** $\beta \leq \alpha$ **then return** α~~

end

return β

Remember: Minimax: Recursive implementation

```
function MINIMAX-DECISION(game) returns an operator
  for each op in OPERATORS[game] do
    VALUE[op] ← MINIMAX-VALUE(APPLY(op, game), game)
  end
  return the op with the highest VALUE[op]



---


function MINIMAX-VALUE(state, game) returns a utility value
  if TERMINAL-TEST[game](state) then
    return UTILITY[game](state)
  else if MAX is to move in state then
    return the highest MINIMAX-VALUE of SUCCESSORS(state)
  else
    return the lowest MINIMAX-VALUE of SUCCESSORS(state)
```

Complete: Yes, for finite state-space

Optimal: Yes

Time complexity: $O(b^m)$

Space complexity: $O(bm)$ (= DFS
Does not keep all nodes in memory.)

More on the α - β algorithm



- Same basic idea as minimax, but prune (cut away) branches of the tree that we know will not contain the solution.
- Because minimax is depth-first, let's consider nodes along a given path in the tree. Then, as we go along this path, we keep track of:
 - α : Best choice so far for MAX
 - β : Best choice so far for MIN

More on the α - β algorithm: start from Minimax

Basically MINIMAX + keep track of α , β + prune

function MAX-VALUE(*state*, *game*, α , β) **returns** the minimax value of *state*

inputs: *state*, current state in game

game, game description

α , the best score for MAX along the path to *state*

β , the best score for MIN along the path to *state*

if CUTOFF-TEST(*state*) **then return** EVAL(*state*)

for each *s* **in** SUCCESSORS(*state*) **do**

$\alpha \leftarrow \text{MAX}(\alpha, \text{MIN-VALUE}(s, \textit{game}, \alpha, \beta))$

if $\alpha \geq \beta$ **then return** β

end

return α

Note: These are both Local variables. At the Start of the algorithm, We initialize them to $\alpha = -\infty$ and $\beta = +\infty$

function MIN-VALUE(*state*, *game*, α , β) **returns** the minimax value of *state*

if CUTOFF-TEST(*state*) **then return** EVAL(*state*)

for each *s* **in** SUCCESSORS(*state*) **do**

$\beta \leftarrow \text{MIN}(\beta, \text{MAX-VALUE}(s, \textit{game}, \alpha, \beta))$

if $\beta \leq \alpha$ **then return** α

end

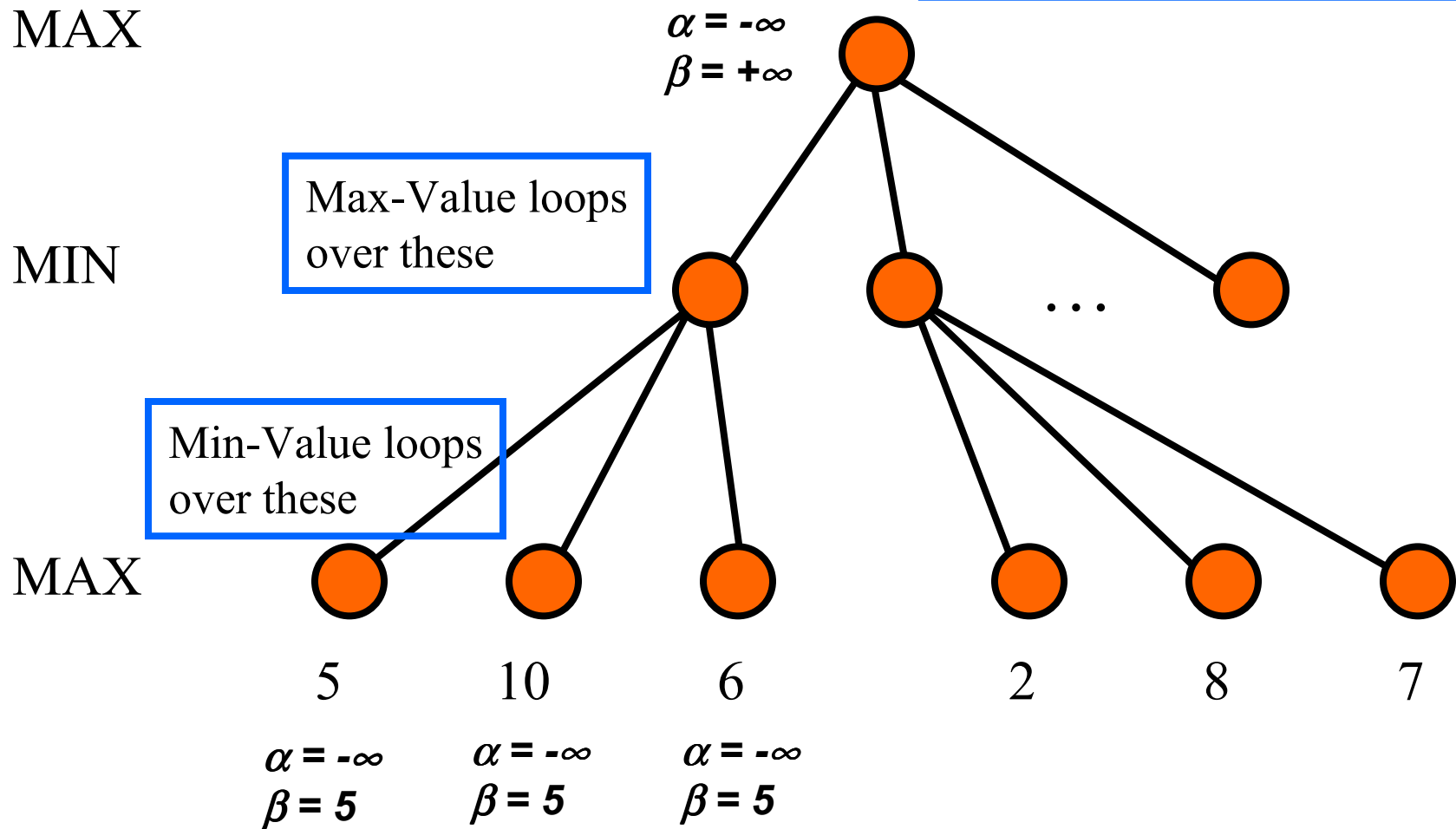
return β

More on the α - β algorithm

In Min-Value:

```

for each  $s$  in SUCCESSORS( $state$ ) do
     $\beta \leftarrow \text{MIN}(\beta, \text{MAX-VALUE}(s, game, \alpha, \beta))$ 
    if  $\beta \leq \alpha$  then return  $\alpha$ 
end
return  $\beta$ 
    
```



More on the α - β algorithm

In Max-Value:

```

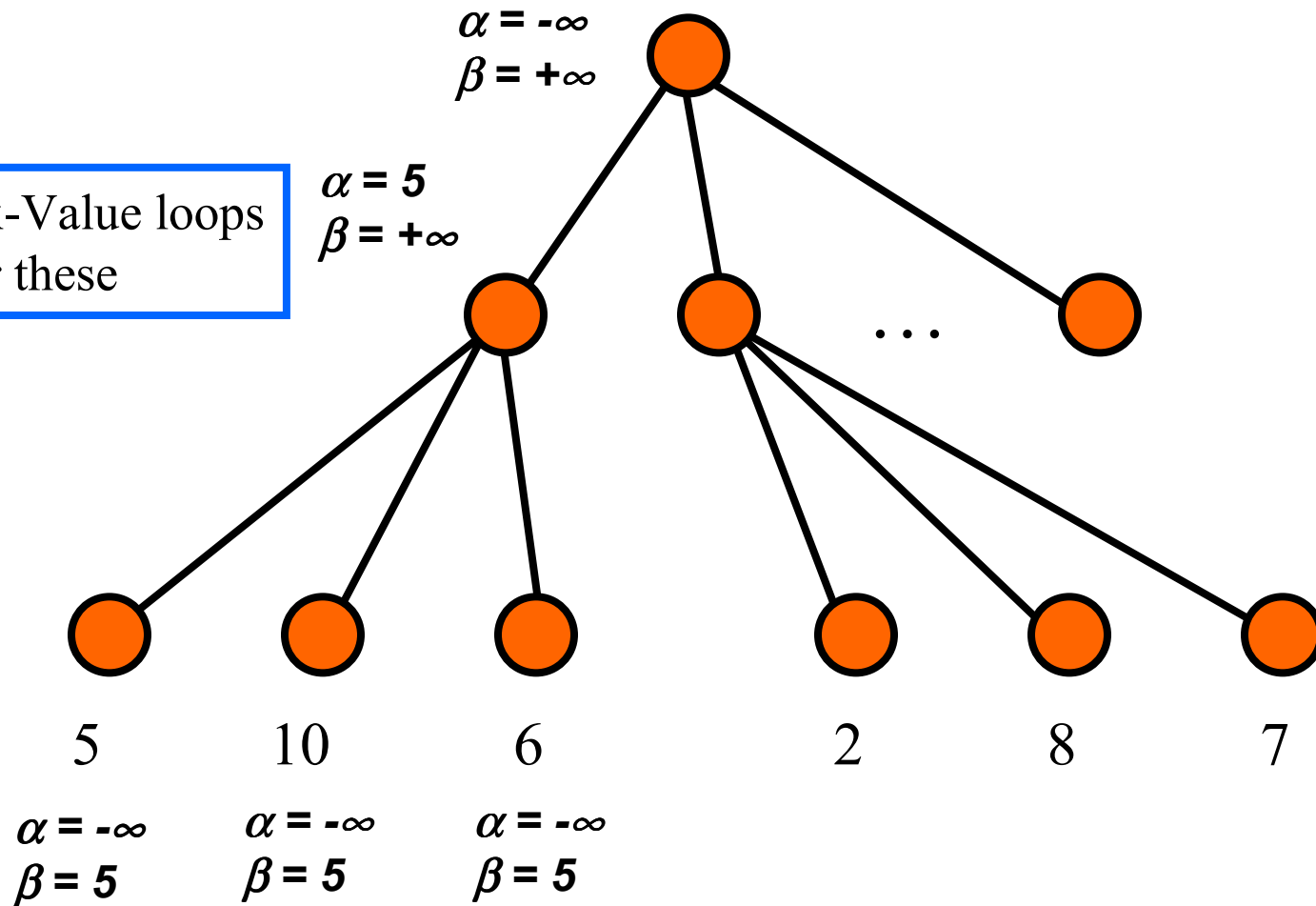
for each  $s$  in SUCCESSORS( $state$ ) do
   $\alpha \leftarrow \text{MAX}(\alpha, \text{MIN-VALUE}(s, game, \alpha, \beta))$ 
  if  $\alpha \geq \beta$  then return  $\beta$ 
end
return  $\alpha$ 
  
```

MAX

MIN

MAX

Max-Value loops over these

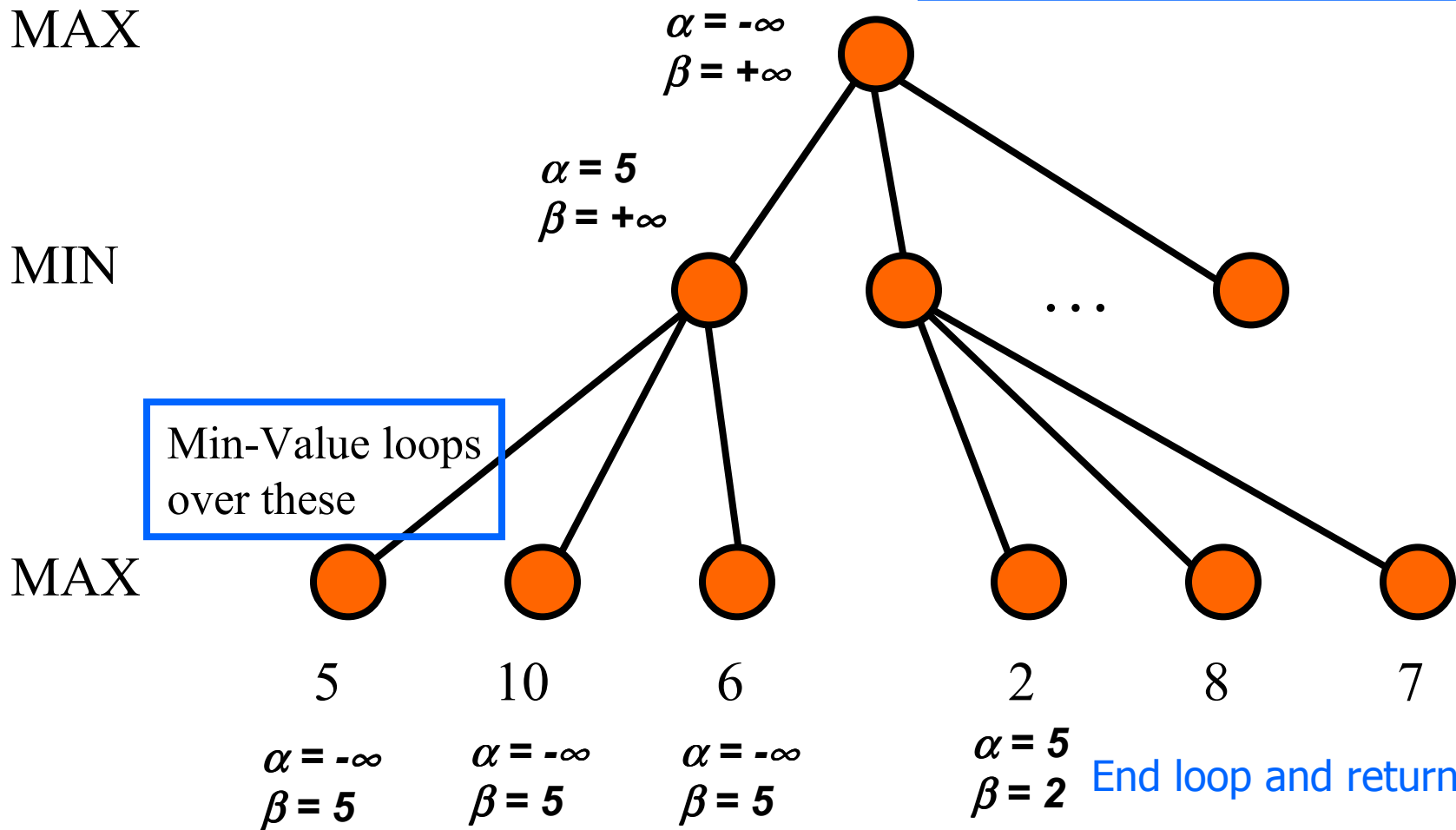


More on the α - β algorithm

In Min-Value:

```

for each  $s$  in SUCCESSORS( $state$ ) do
     $\beta \leftarrow \text{MIN}(\beta, \text{MAX-VALUE}(s, game, \alpha, \beta))$ 
    if  $\beta \leq \alpha$  then return  $\alpha$ 
end
return  $\beta$ 
    
```



More on the α - β algorithm

In Max-Value:

```

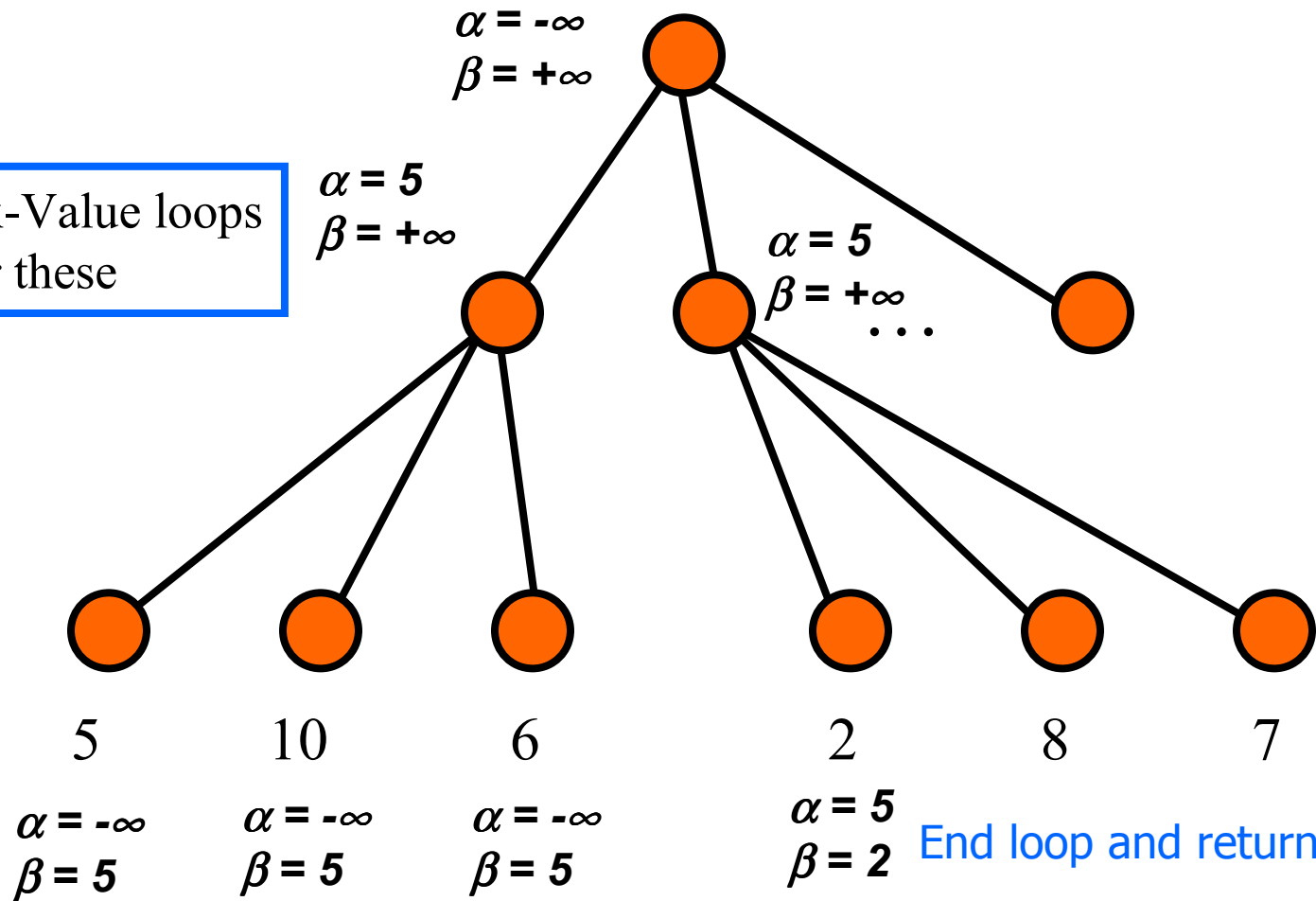
for each  $s$  in SUCCESSORS( $state$ ) do
   $\alpha \leftarrow \text{MAX}(\alpha, \text{MIN-VALUE}(s, game, \alpha, \beta))$ 
  if  $\alpha \geq \beta$  then return  $\beta$ 
end
return  $\alpha$ 
    
```

MAX

MIN

MAX

Max-Value loops over these



End loop and return 5

Another way to understand the algorithm



- From:

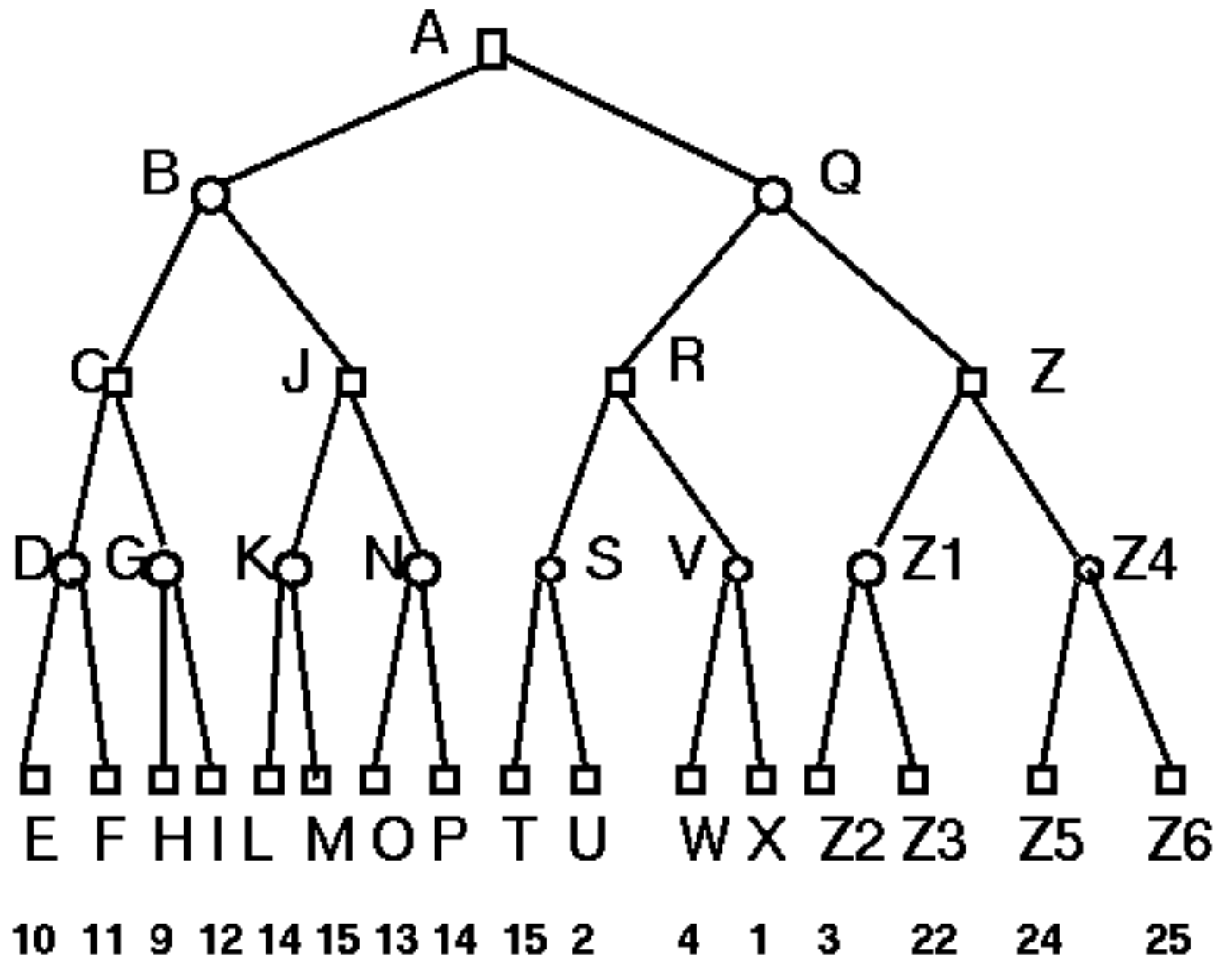
<http://yoda.cis.temple.edu:8080/UGAIWWW/lectures95/search/alpha-beta.html>

- For a given node N,

α is the value of N to MAX

β is the value of N to MIN

Example



□ ARE MAX NODES

○ ARE MIN NODES

**MiniMax
+
Alpha-Beta**

α - β algorithm:

Basically MINIMAX + keep track of α , β + prune

```
function MAX-VALUE(state, game,  $\alpha$ ,  $\beta$ ) returns the minimax value of state
```

```
  inputs: state, current state in game
```

```
    game, game description
```

```
     $\alpha$ , the best score for MAX along the path to state
```

```
     $\beta$ , the best score for MIN along the path to state
```

```
  if CUTOFF-TEST(state) then return EVAL(state)
```

```
  for each s in SUCCESSORS(state) do
```

```
     $\alpha \leftarrow$  MAX( $\alpha$ , MIN-VALUE(s, game,  $\alpha$ ,  $\beta$ ))
```

```
    if  $\alpha \geq \beta$  then return  $\beta$ 
```

```
  end
```

```
  return  $\alpha$ 
```

```
function MIN-VALUE(state, game,  $\alpha$ ,  $\beta$ ) returns the minimax value of state
```

```
  if CUTOFF-TEST(state) then return EVAL(state)
```

```
  for each s in SUCCESSORS(state) do
```

```
     $\beta \leftarrow$  MIN( $\beta$ , MAX-VALUE(s, game,  $\alpha$ ,  $\beta$ ))
```

```
    if  $\beta \leq \alpha$  then return  $\alpha$ 
```

```
  end
```

```
  return  $\beta$ 
```

Solution

NODE	TYPE	ALPHA	BETA	SCORE
A	Max	-I	+I	
B	Min	-I	+I	
C	Max	-I	+I	
D	Min	-I	+I	
E	Max	10	10	10
D	Min	-I	10	
F	Max	11	11	11
D	Min	-I	10	10
C	Max	10	+I	
G	Min	10	+I	
H	Max	9	9	9
G	Min	10	9	9
C	Max	10	+I	10
B	Min	-I	10	
J	Max	-I	10	
K	Min	-I	10	
L	Max	14	14	14
K	Min	-I	10	10
...				

NODE	TYPE	ALPHA	BETA	SCORE
...				
J	Max	10	10	10
B	Min	-I	10	10
A	Max	10	+I	
Q	Min	10	+I	
R	Max	10	+I	
S	Min	10	+I	
T	Max	5	5	5
S	Min	10	5	5
R	Max	10	+I	
V	Min	10	+I	
W	Max	4	4	4
V	Min	10	4	4
R	Max	10	+I	10
Q	Min	10	10	10
A	Max	10	10	10

State-of-the-art for deterministic games

Checkers: Chinook ended 40-year-reign of human world champion Marion Tinsley in 1994. Used an endgame database defining perfect play for all positions involving 8 or fewer pieces on the board, a total of 443,748,401,247 positions.

Chess: Deep Blue defeated human world champion Gary Kasparov in a six-game match in 1997. Deep Blue searches 200 million positions per second, uses very sophisticated evaluation, and undisclosed methods for extending some lines of search up to 40 ply.

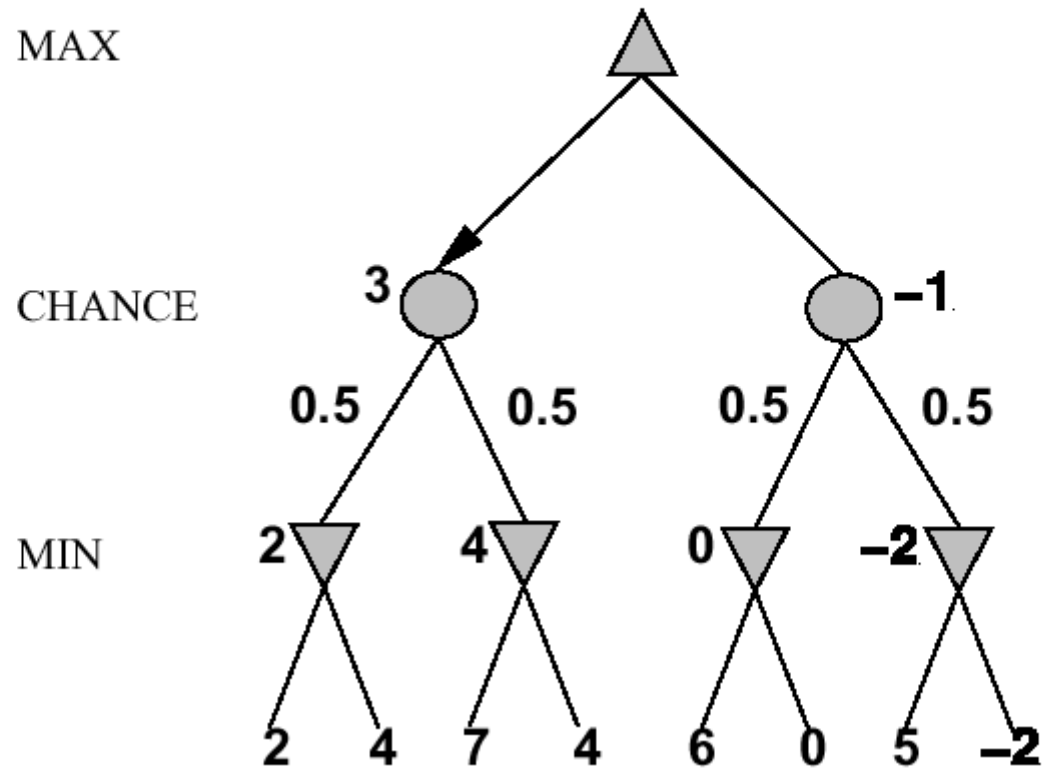
Othello: human champions refuse to compete against computers, who are too good.

Go: human champions refuse to compete against computers, who are too bad. In go, $b > 300$, so most programs use pattern knowledge bases to suggest plausible moves.

Nondeterministic games

E..g, in backgammon, the dice rolls determine the legal moves

Simplified example with coin-flipping instead of dice-rolling:



Algorithm for nondeterministic games

EXPECTIMINIMAX gives perfect play

Just like MINIMAX, except we must also handle chance nodes:

...

if *state* is a chance node **then**

return average of EXPECTIMINIMAX-VALUE of SUCCESSORS(*state*)

...

A version of α - β pruning is possible

but only if the leaf values are bounded. Why??

Remember: Minimax algorithm

function MINIMAX-DECISION(*game*) *returns an operator*

for each *op* **in** OPERATORS[*game*] **do**

 VALUE[*op*] ← MINIMAX-VALUE(APPLY(*op*, *game*), *game*)

end

return the *op* with the highest VALUE[*op*]

function MINIMAX-VALUE(*state*, *game*) *returns a utility value*

if TERMINAL-TEST[*game*](*state*) **then**

return UTILITY[*game*](*state*)

else if MAX is to move in *state* **then**

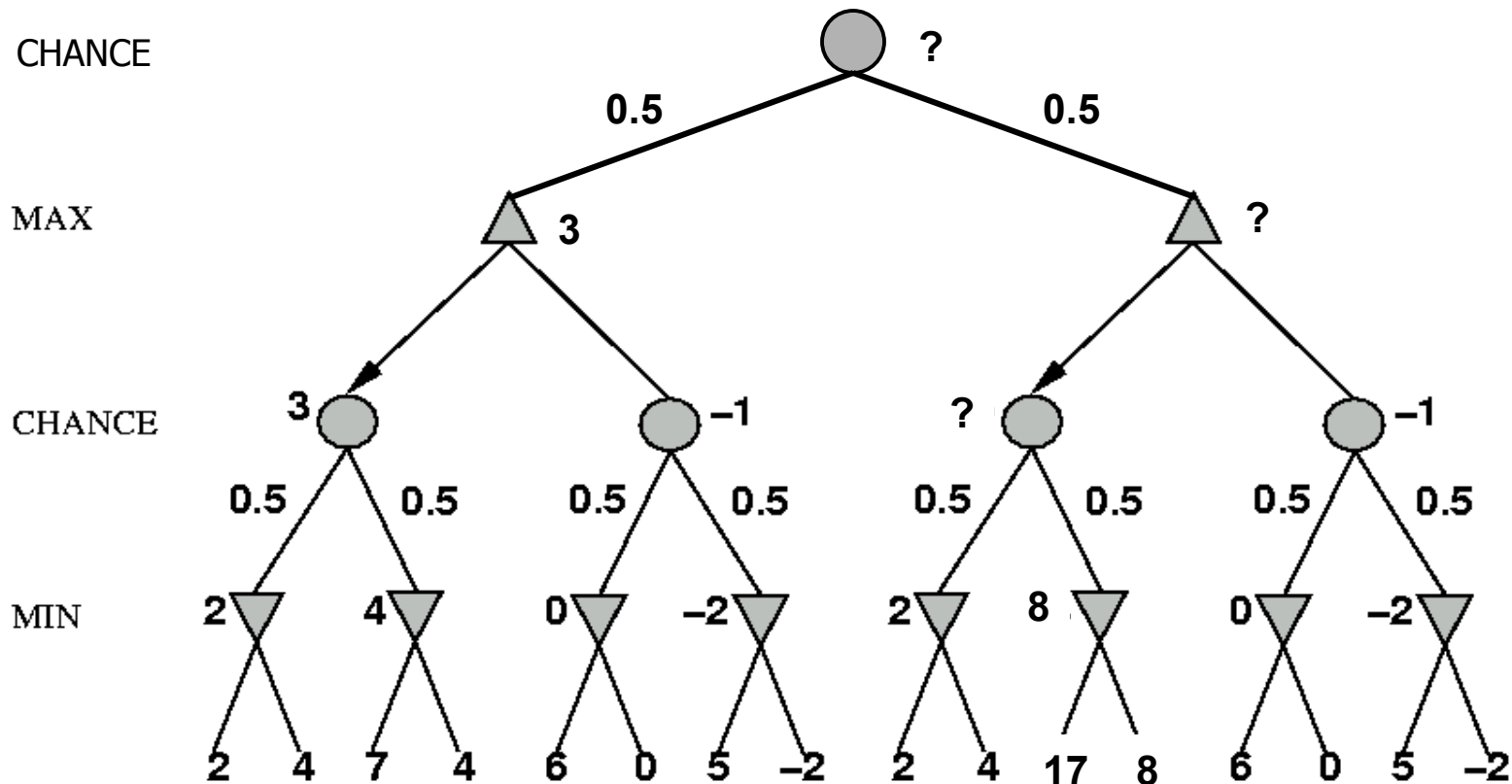
return the highest MINIMAX-VALUE of SUCCESSORS(*state*)

else

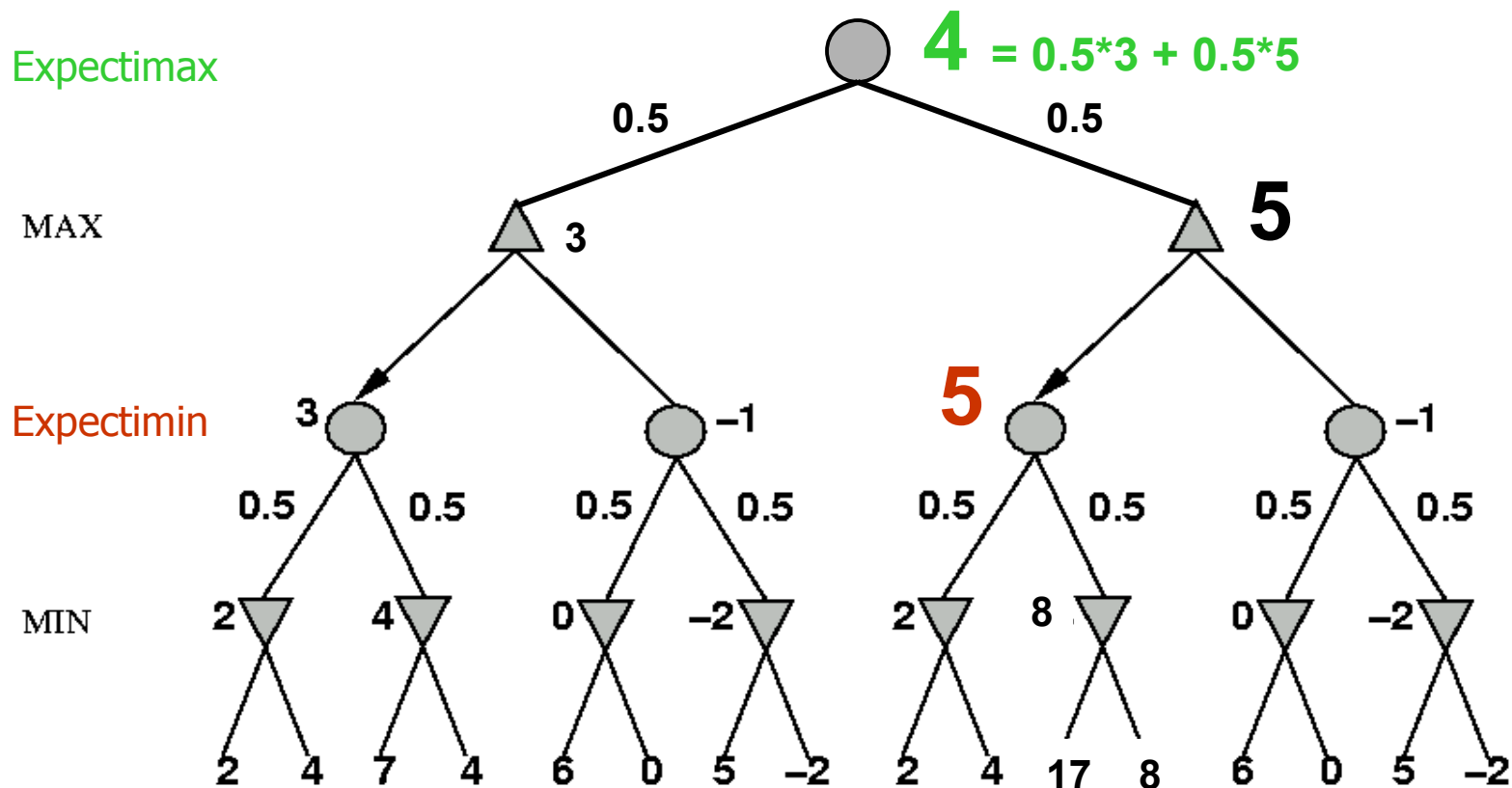
return the lowest MINIMAX-VALUE of SUCCESSORS(*state*)

Nondeterministic games: the element of chance

expectimax and **expectimin**, expected values over all possible outcomes

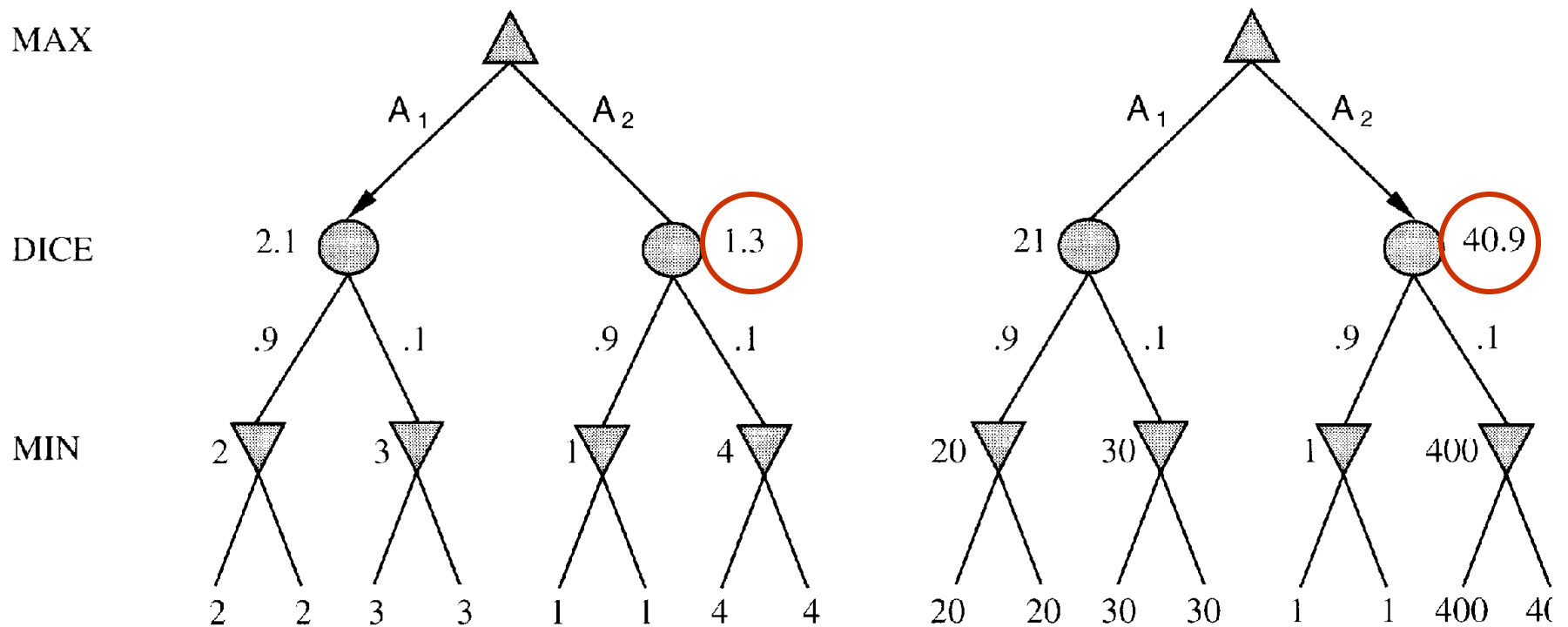


Nondeterministic games: the element of chance



Evaluation functions: Exact values DO matter

Order-preserving transformation do not necessarily behave the same!



State-of-the-art for nondeterministic games



Dice rolls increase b : 21 possible rolls with 2 dice

Backgammon \approx 20 legal moves (can be 6,000 with 1-1 roll)

$$\text{depth } 4 = 20 \times (21 \times 20)^3 \approx 1.2 \times 10^9$$

As depth increases, probability of reaching a given node shrinks

\Rightarrow value of lookahead is diminished

α - β pruning is much less effective

Summary



Games are fun to work on! (and dangerous)

They illustrate several important points about AI

- ◇ perfection is unattainable \Rightarrow must approximate
- ◇ good idea to think about what to think about
- ◇ uncertainty constrains the assignment of values to states

Games are to AI as grand prix racing is to automobile design

Exercise: Game Playing

Consider the following game tree in which the evaluation function values are shown below each leaf node. Assume that the root node corresponds to the maximizing player. Assume the search always visits children left-to-right.

- Compute the backed-up values computed by the minimax algorithm. Show your answer by writing values at the appropriate nodes in the above tree.
- Compute the backed-up values computed by the alpha-beta algorithm. What nodes will not be examined by the alpha-beta pruning algorithm?
- What move should Max choose once the values have been backed-up all the way?

